
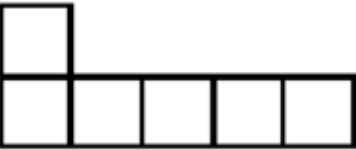
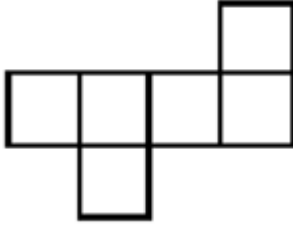
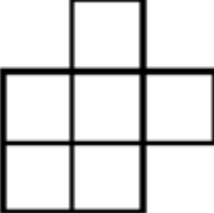
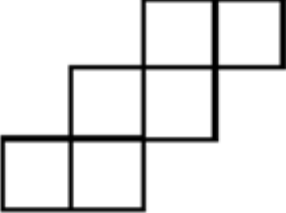
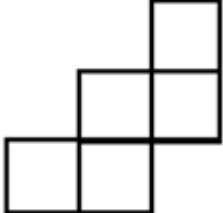
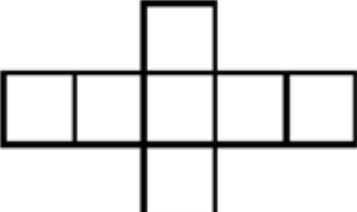
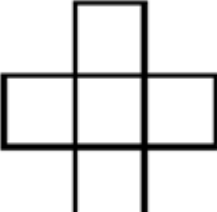
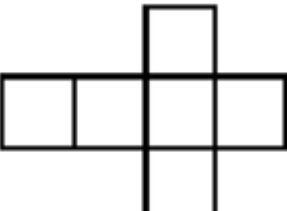


PATRONS DE CUBE

Entoure les patrons de cube ?

Pour chaque patron que tu n'as pas entouré, explique pourquoi ce n'est pas un patron de cube.

<p>A</p>  <p>----- ----- ----- -----</p>	<p>B</p>  <p>----- ----- ----- -----</p>	<p>C</p>  <p>----- ----- ----- -----</p>
<p>D</p>  <p>----- ----- ----- -----</p>	<p>E</p>  <p>----- ----- ----- -----</p>	<p>F</p>  <p>----- ----- ----- -----</p>
<p>G</p>  <p>----- ----- ----- -----</p>	<p>H</p>  <p>----- ----- ----- -----</p>	<p>I</p>  <p>----- ----- ----- -----</p>