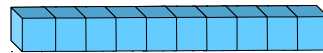
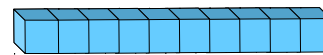
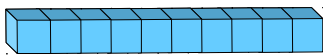
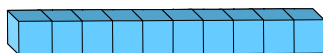
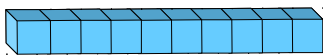
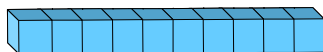
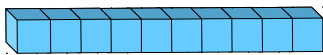
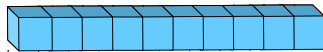
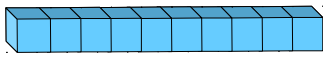


Prénom : \_\_\_\_\_

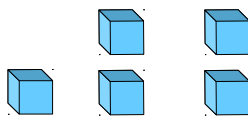
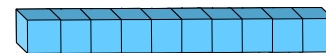
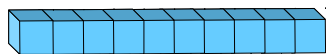

1. Le lapin de Pâques a fait des groupes de 10 cubes.  
Aide-le en faisant un groupe de 100 cubes.  
Ensuite compte les cubes.



Réponse : il y a \_\_\_\_\_ cubes.

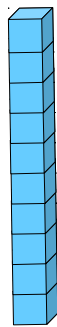

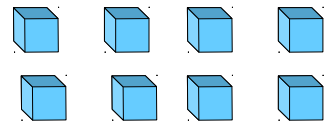
2. Combien y a-t-il de cubes ?

a)



Réponse : il y a \_\_\_\_\_ cubes.

b)



Réponse : il y a \_\_\_\_\_ cubes.

