












# Les doubles

	 $6 + 6 = ?$	 $9 + 9 = ?$	
 $? + 7 = 7 + 7$	<p>12</p> <p>8</p>	<p>18</p> <p>6</p>	 $3 + 3 = ?$
 $? = 7 + 7$	<p>14</p> <p>10</p>	<p>20</p> <p>16</p>	 $10 + 10 = ?$
	 $5 + 5 = ?$	 $8 + 8 = ?$	