

Prénom : _____

Date : / /

Evaluation Calculs

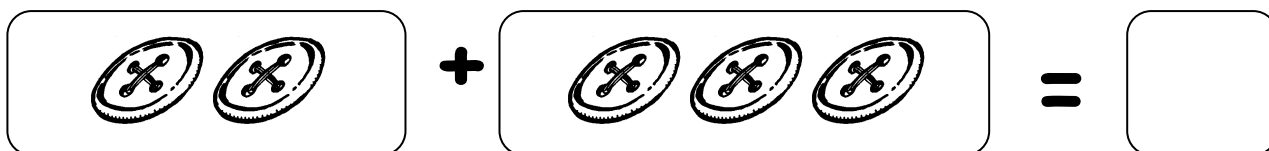

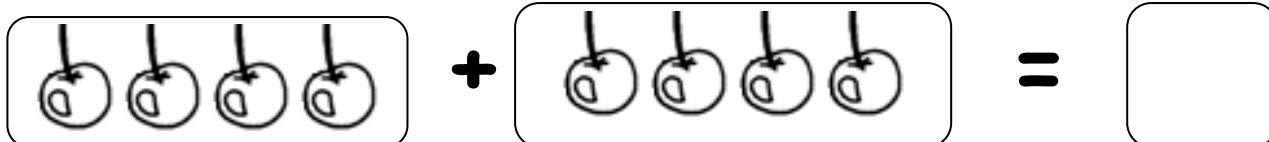
Octobre 2012

Je sais calculer des additions inférieures ou égales à 9.

Note sur 10 : /10

Moyenne classe : /10

1- Calcule



2- Complète les additions

$3 + 6 =$

$6 + 2 =$

$4 + 5 =$

$5 + 3 =$

$2 + 2 + 4 =$

$3 + 1 + 6 =$

3- Complète les additions

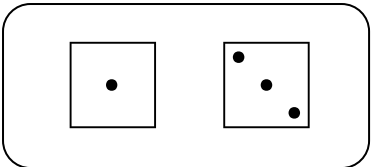
$3 + \underline{\quad} = 7$

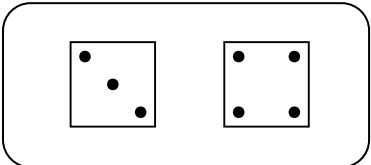
$6 + \underline{\quad} = 9$

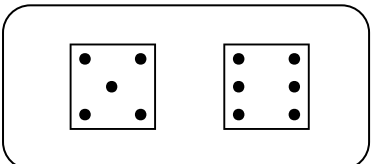
$4 + \underline{\quad} = 8$

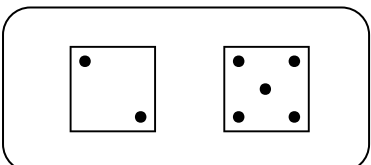
$5 + \underline{\quad} = 6$

4- observe et écris les additions puis calcule.

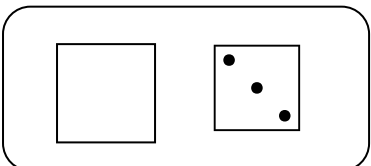
 $\dots\dots\dots + \dots\dots\dots =$

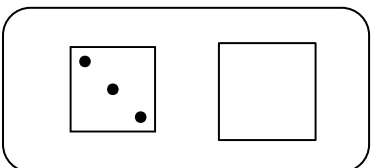
 $\dots\dots\dots + \dots\dots\dots =$

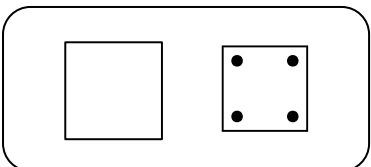
 $\dots\dots\dots + \dots\dots\dots =$

 $\dots\dots\dots + \dots\dots\dots =$

5- Observe et complète

 $2 + \dots\dots\dots = 5$

 $\dots\dots\dots + 5 = 8$

 $6 + \dots\dots\dots = 9$