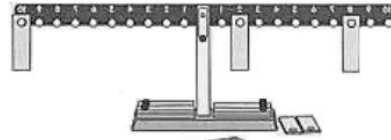



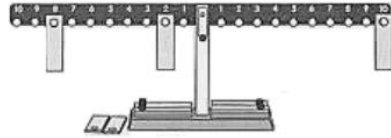
$$\square + \square = 10$$



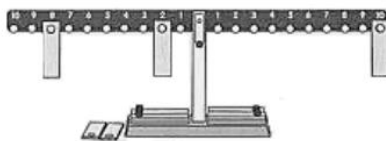
$$\square + \square = 10$$




$$\square + \square = 10$$




$$\square + \square = 10$$



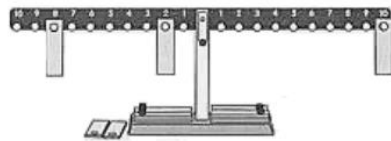
$$\square + \square = 10$$



$$\square + \square = 10$$



$$\square + \square = 10$$



$$\square + \square = 10$$