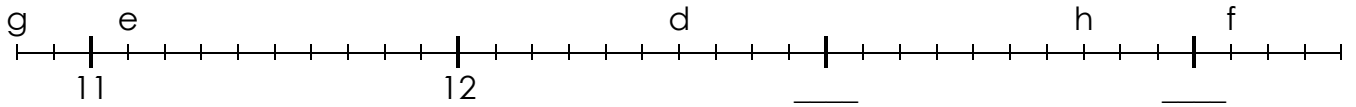


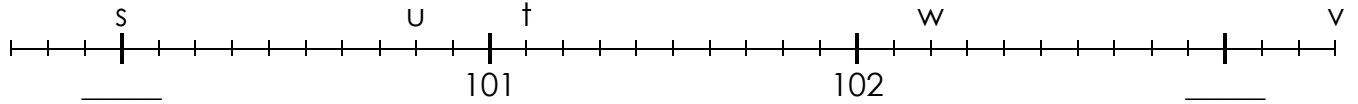


LES NOMBRES RATIONNELS – Pour tous

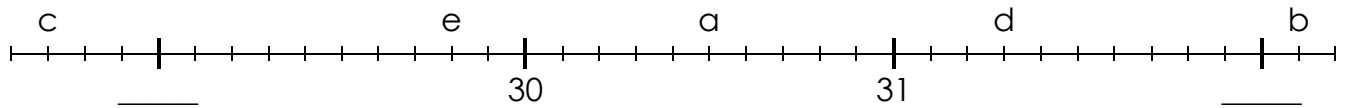
1. Code les points suivants :



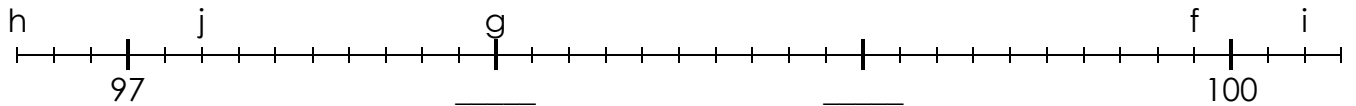
d = _____ e = _____ f = _____ g = _____ h = _____



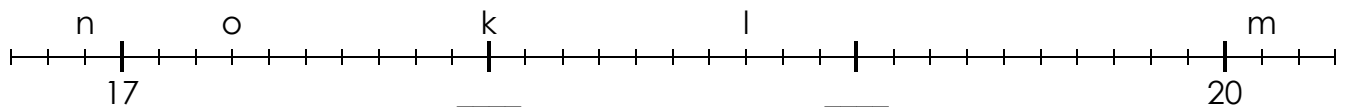
s = _____ t = _____ u = _____ v = _____ w = _____



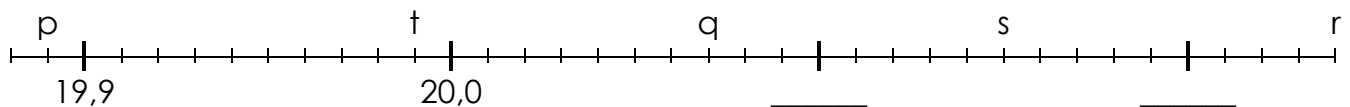
a = _____ b = _____ c = _____ d = _____ e = _____



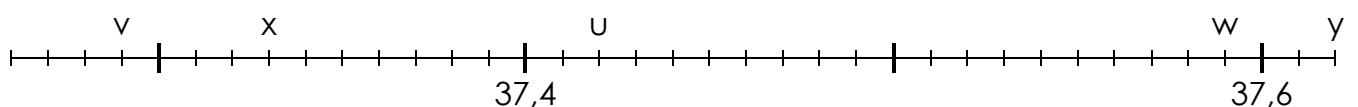
f = _____ g = _____ h = _____ i = _____ j = _____



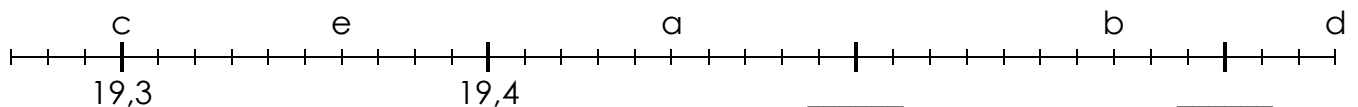
k = _____ l = _____ m = _____ n = _____ o = _____



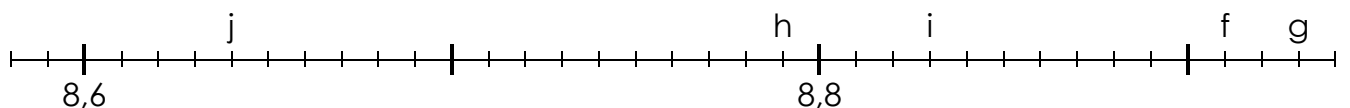
p = _____ q = _____ r = _____ s = _____ t = _____



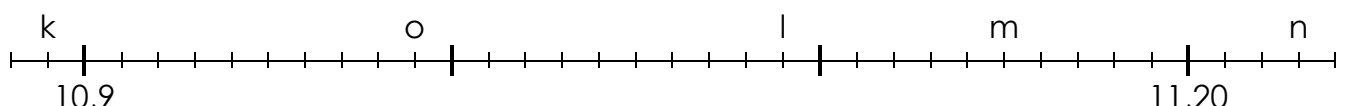
u = _____ v = _____ w = _____ x = _____ y = _____



a = _____ b = _____ c = _____ d = _____ e = _____



f = _____ g = _____ h = _____ i = _____ j = _____



k = _____ l = _____ m = _____ n = _____ o = _____