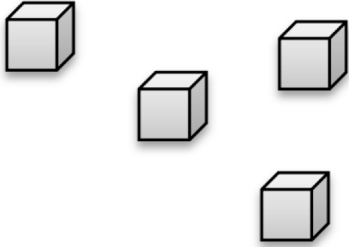


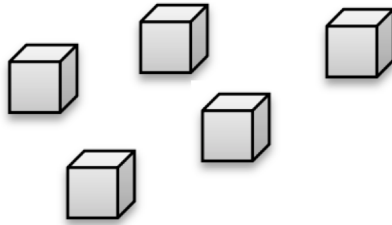


1 2 . 4

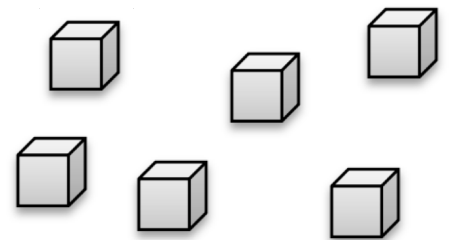
Calcule en barrant si nécessaire.



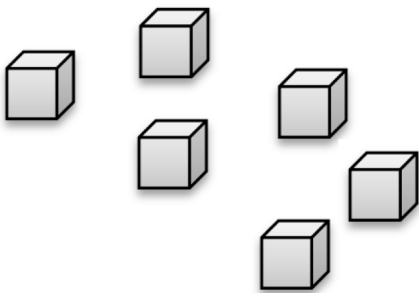
$$4 - 2 = \dots$$



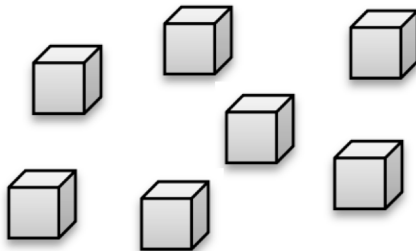
$$5 - 3 = \dots$$



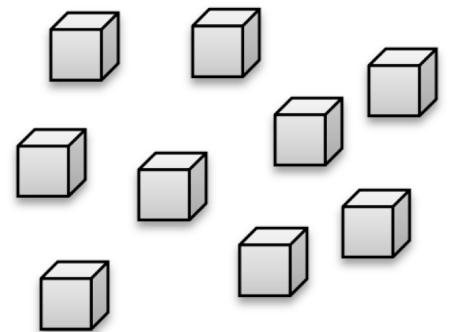
$$6 - 4 = \dots$$



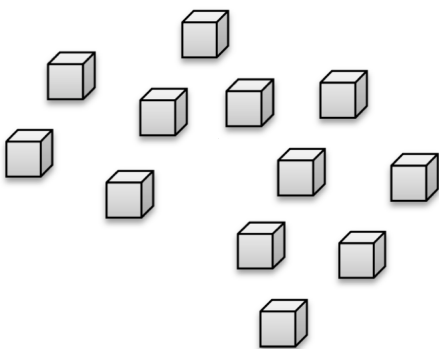
$$6 - 5 = \dots$$



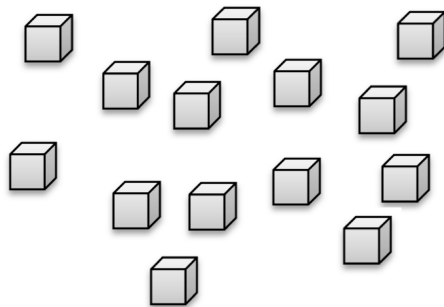
$$7 - 1 = \dots$$



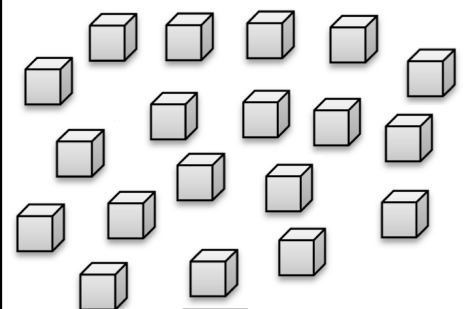
$$9 - 4 = \dots$$




$$12 - 7 = \dots$$



$$14 - 11 = \dots$$



$$19 - 7 = \dots$$



Complète la soustraction.

$4 - \dots = 2$

$5 - \dots = 0$

$6 - \dots = 3$

$6 - \dots = 5$

$7 - \dots = 3$

$9 - \dots = 8$

$12 - \dots = 10$

$14 - \dots = 9$

$19 - \dots = 5$