



lundi

mardi

mercredi

jeudi

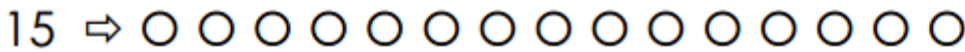
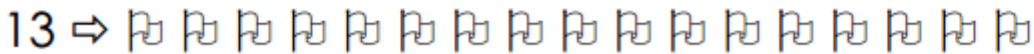
vendredi

samedi

dimanche

Fiche n° 11

1. Entoure.



2. Complète.

---



---






---



---



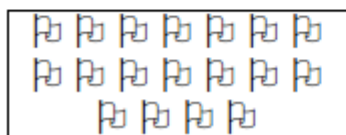
3. Relie chaque collection au nombre.



17

18

19



4. Complète le tableau.

| avant | le nombre | après |
|-------|-----------|-------|
|       | 15        |       |
|       | 19        |       |
|       | 10        |       |
|       | 17        |       |

5. Place les signes  $>$  ou  $<$ .

10 \_\_\_ 19

19 \_\_\_ 15

17 \_\_\_ 12

18 \_\_\_ 17

19 \_\_\_ 15

19 \_\_\_ 9

13 \_\_\_ 8

12 \_\_\_ 19

17 \_\_\_ 19

6. Calcule.

$10 + 8 =$  \_\_\_

$10 + 5 =$  \_\_\_

$10 + 0 =$  \_\_\_

$10 + 6 =$  \_\_\_

$10 + 7 =$  \_\_\_

$10 + 2 =$  \_\_\_

$10 + 3 =$  \_\_\_

$10 + 1 =$  \_\_\_

$10 + 9 =$  \_\_\_