



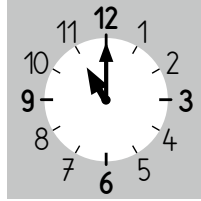
Écris l'heure indiquée sur chaque horloge.
C'est le matin.



Il est heures.



Il est heures.



Il est heures.



Il est heures.




Il est heures.

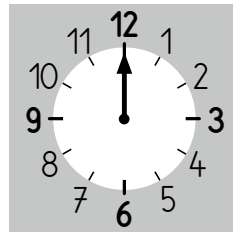


Il est heures.

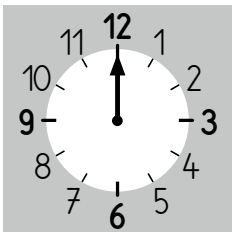
Dessine la petite aiguille.



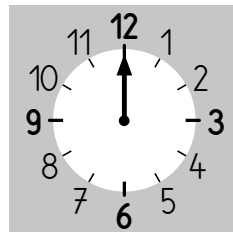
Il est
6 heures.



Il est
10 heures.




Il est
2 heures.

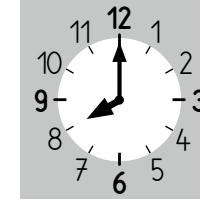


Il est
4 heures.

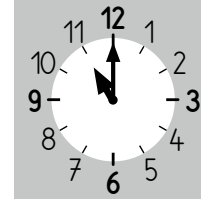
Écris l'heure indiquée sur chaque horloge.
C'est le matin.



Il est heures.



Il est heures.



Il est heures.



Il est heures.

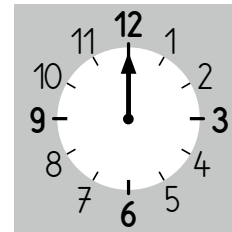


Il est heures.

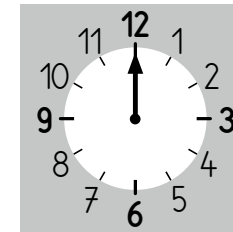


Il est heures.

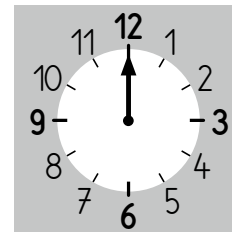
Dessine la petite aiguille.



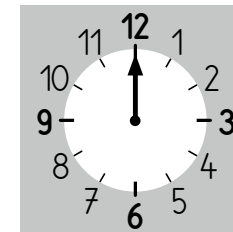
Il est
6 heures.



Il est
10 heures.



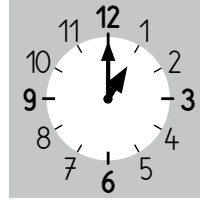
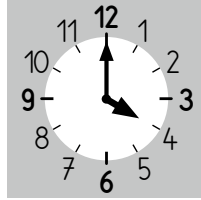

Il est
2 heures.



Il est
4 heures.




Écris l'heure indiquée sur chaque horloge.
C'est l'après-midi.

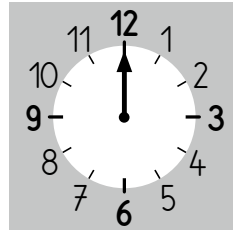


Il est heures. Il est heures. Il est heures.


Dessine la petite aiguille.



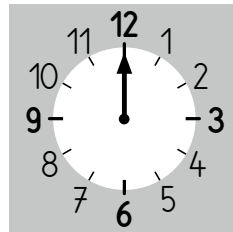
Il est
15 heures.



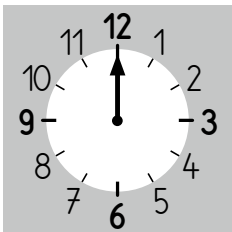
Il est
13 heures.



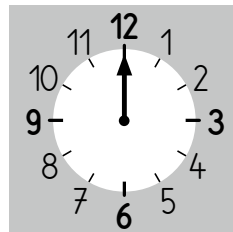
Il est
17 heures.



Il est
14 heures.






Il est midi.



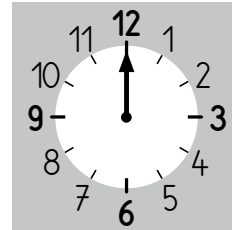
Il est
18 heures.

Écris l'heure indiquée sur chaque horloge.
C'est l'après-midi.

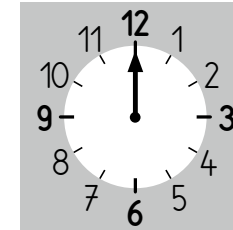


Il est heures. Il est heures. Il est heures.

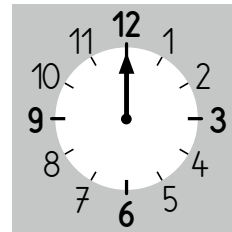
Dessine la petite aiguille.



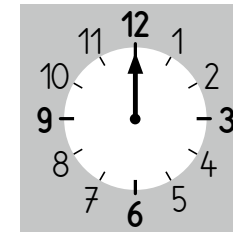
Il est
15 heures.



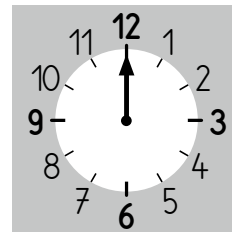
Il est
13 heures.



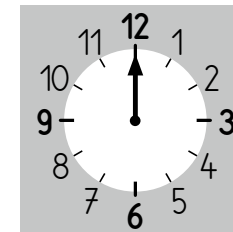
Il est
17 heures.



Il est
14 heures.



Il est midi.



Il est
18 heures.

