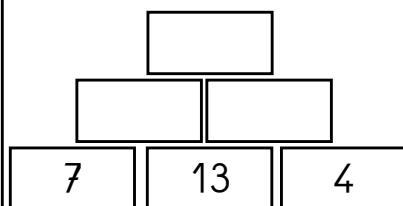


JOUR 1

Pyramide de calcul

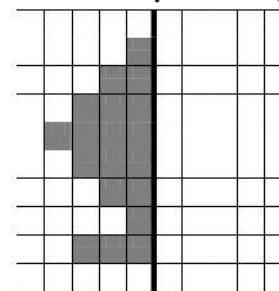


Encadre les nombres

..... <841 <.....
 <503 <.....
 <492 <.....
 <860 <.....

2x7 =
 5x3 =
 2x3 =
 5x9 =
 2x9 =
 2x1 =

Dessine le symétrique



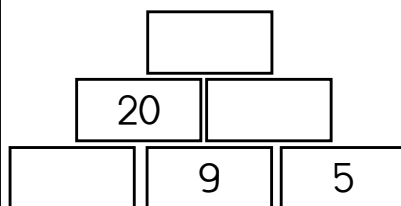
..... €

JOUR 2



..... €

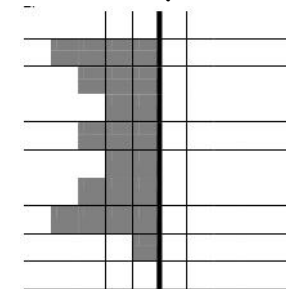
Pyramide de calcul



Dessine le nombre 759

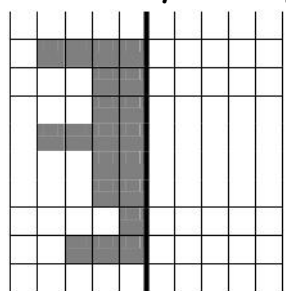
2x4 =
 5x6 =
 2x6 =
 5x2 =
 2x10 =
 5x7 =

Dessine le symétrique



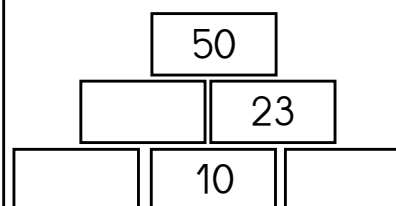
JOUR 3

Dessine le symétrique



..... €

Pyramide de calcul



décompose les nombres
 238 = 200 + 30 + 8

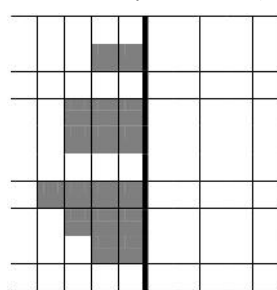
583 =
 674 =
 930 =
 827 =

2x5 =
 5x8 =
 2x8 =
 5x5 =
 2x2 =
 5x10 =

JOUR 4

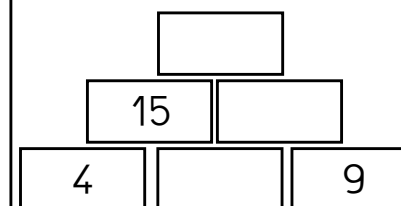
2x2 =
 5x4 =
 2x12 =
 5x9 =
 2x20 =
 5x6 =

Dessine le symétrique



..... €

Pyramide de calcul



Écris des nombres à 3 chiffres à partir de ces mots
 Cent - trois - trente - treize - soixante - cinq