








	15	...	17	14
	11	...	13	15
	10	...	12	16
	19	...	21	11
	16	...	18	12
	13	...	15	17
	14	...	16	20
	18	...	20	19

santiane.fr





Logico

Les nombres de 0 à 29




Encadrement

fiche 1



	20	...	22	24
	22	...	24	21
	26	...	28	26
	21	...	23	27
	24	...	26	23
	23	...	25	28
	25	...	27	22
	27	...	29	25

Sanleane.fr











Logico

Les nombres de 0 à 29



Encadrement

fiche 2



	5	...	7	20
	11	...	13	24
	0	...	2	15
	19	...	21	1
	26	...	28	12
	23	...	25	27
	14	...	16	6
	28	...	30	29

Sanleane.fr











Logico

Les nombres de 0 à 29



Encadrement

fiche 3



	15	...	17	22
	21	...	23	11
	10	...	12	16
	9	...	11	14
	6	...	8	9
	13	...	15	25
	24	...	26	19
	18	...	20	10

Sanleane.fr



Logico

Les nombres de 0 à 29

Encadrement

fiche 4



$25 < \dots < 27$

$16 < \dots < 18$

$7 < \dots < 9$

$12 < \dots < 14$

$1 < \dots < 3$

$22 < \dots < 24$

$15 < \dots < 17$

$27 < \dots < 29$

16

2

13




28

8

23

17

26






Logico

Les nombres de 0 à 29




Encadrement

fiche 5



	15	16	...	18
	17	15	...	17
	19	14	...	16
	11	18	...	20
	13	10	...	12
	14	12	...	14
	16	9	...	11
	10	15	...	17

Sanleane.fr



Logico

Les nombres de 0 à 29





Encadrement

fiche A



	22	21	...	23
	24	22	...	24
	26	23	...	25
	28	26	...	28
	21	27	...	29
	23	24	...	26
	25	25	...	27
	27	20	...	22

Sanleane.fr

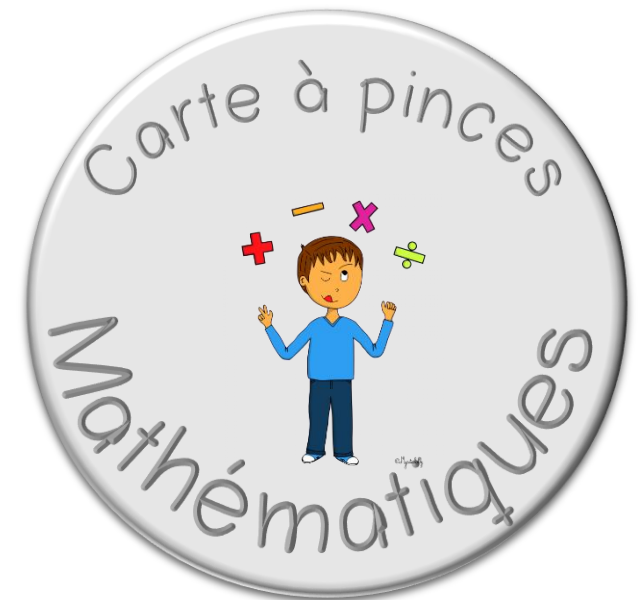


Logico

Les nombres de 0 à 29

Encadrement

fiche B



6

17

25

27

16

12

21

10

15 < ... < 17

20 < ... < 22

5 < ... < 7

11 < ... < 13

24 < ... < 26

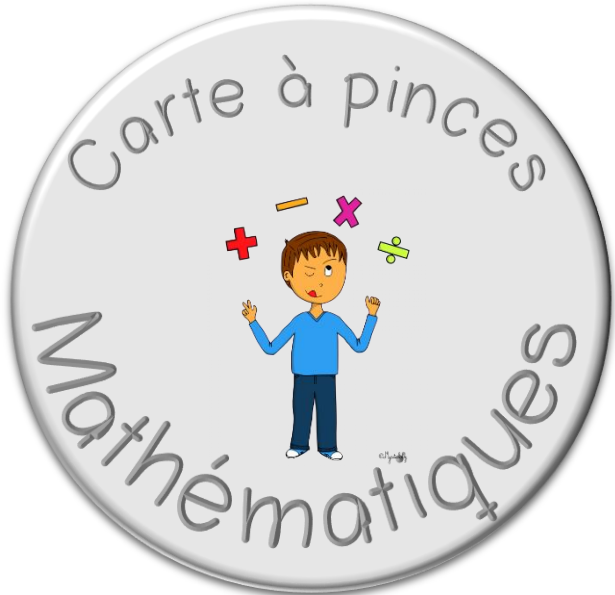
26 < ... < 28

9 < ... < 11

16 < ... < 18



Logico
Les nombres de 0 à 29
Encadrement
fiche C



9

15

23

19

14

24

21

17

$23 < \dots < 25$

$20 < \dots < 22$

$13 < \dots < 15$




$14 < \dots < 16$

$22 < \dots < 24$

$20 < \dots < 21$

$16 < \dots < 18$

$8 < \dots < 10$



Logico
Les nombres de 0 à 29
Encadrement
fiche D

