










Name \_\_\_\_\_

Date \_\_\_\_\_



## SUBTRACTION PROBLEMS TO 15 SHEET 2UK










	WORKING OUT
1) There are 12  . 6  swim away. How many are left? _____	
2) Captain makes 11  . Tyger makes 8  . How many more did Captain make? _____	
3) I buy 14  . I eat 5  . What is $14 - 5$ ? _____	
4) I have £12. I spend £6. How much money do I have left? £ _____	
5) There are 15  . 4  are cut down. How many  are left? _____	
6) Sally has 12¢. Frazer has 8¢. What is the difference? _____ ¢	

Name

Date



## SUBTRACTION PROBLEMS TO 15 SHEET 2UK ANSWERS

	WORKING OUT
1) There are 12  6  swim away. How many are left? <u>6</u>	$\underline{12 - 6 = 6}$
2) Captain makes 11  Tyger makes 8  How many more did Captain make? <u>3</u>	$\underline{11 - 8 = 3}$
3) I buy 14  I eat 5  What is $14 - 5$ ? <u>9</u>	$\underline{14 - 5 = 9}$
4) I have £12. I spend £6. How much money do I have left? £ <u>6</u>	$\underline{12 - 6 = 6}$
5) There are 15  4  are cut down. How many  are left? <u>11</u>	$\underline{15 - 4 = 11}$
6) Sally has 12¢. Frazer has 8¢. What is the difference? <u>4</u> ¢	$\underline{12 - 8 = 4}$