




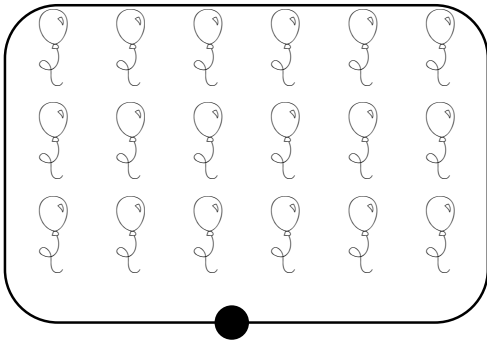
Vers la multiplication ...

Ecris deux additions différentes qui te permettent de trouver combien de fraises il y a :



----- =
----- =

Relie chaque collection aux 2 écritures qui conviennent :



$2 + 2 + 2 + 2$

2×5


2×4

$6 + 6 + 6$

$5 + 5$

6×3

Barre les opérations qui ne correspondent pas au schéma :



2×5

7×3

$3 + 3 + 3 + 3 + 3 + 3 + 3$

$5 + 5 + 5 + 5 + 5$

$1 + 20$

3×7

$7 + 7 + 7$