


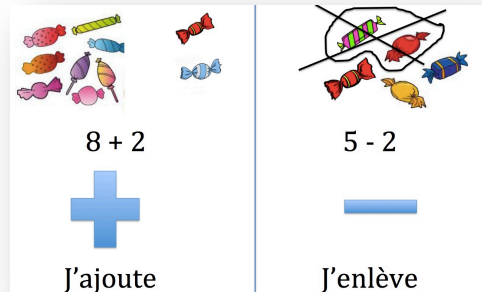


1. Trace les repères 5 et dessine les nombres comme Dédé.



2. Calcule (attention aux signes + et -)



$8 + 2 = \dots\dots$

$4 + 3 = \dots\dots$

$4 + 5 = \dots\dots$

$5 + 0 = \dots\dots$

$6 - 3 = \dots\dots$

$5 - 3 = \dots\dots$

$6 + 3 = \dots\dots$

$6 + 2 = \dots\dots$

$8 - 2 = \dots\dots$

$7 - 4 = \dots\dots$

$6 - 3 = \dots\dots$

$9 - 5 = \dots\dots$

$5 - 1 = \dots\dots$

$3 + 5 = \dots\dots$