



CARTABLE
FANTASTIQUE

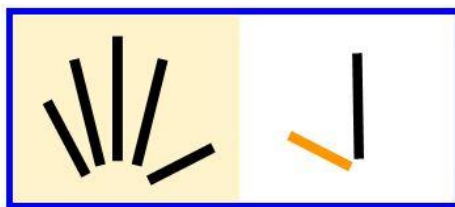
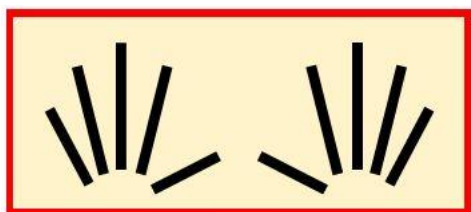
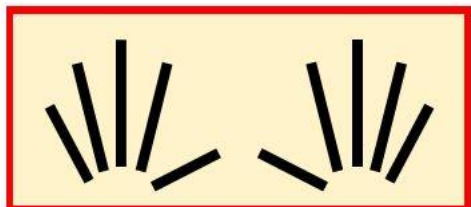
CYCLE 2 - LES NOMBRES

Compter de 20 à 29

Le cahier d'exercices pour la classe



Je montre



Je lis

27 → vingt-sept

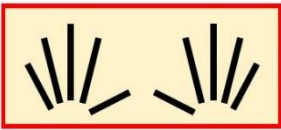


1 Place les cartons sur ton bureau pour faire :

24 - 21 - 20

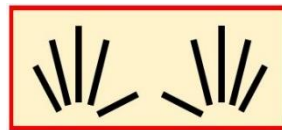
2 Est-ce que ça fait ... :

26 ?



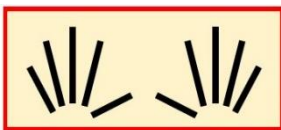
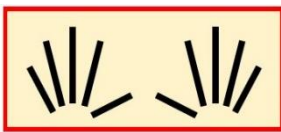
Oui Non

23 ?



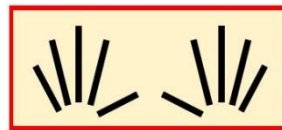
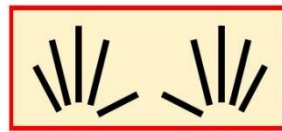
Oui Non

25 ?



Oui Non

29 ?



Oui Non



3 Complète les files numériques :

De 1 en 1 :

20		22		24	25			28	
----	--	----	--	----	----	--	--	----	--




De 2 en 2 :

20				28
----	--	--	--	----

21				29
----	--	--	--	----




4 Est-ce que ça fait ... :

22 ?






Oui Non

21 ?






Oui Non

27 ?



Oui Non

24 ?

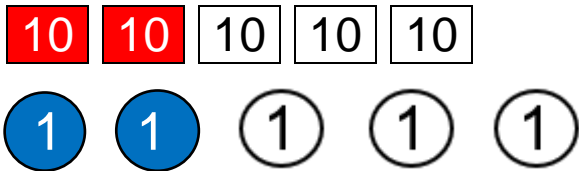


Oui Non

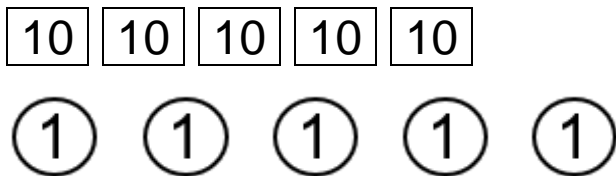


5 Colorie les paquets de 10 en rouge et les unités en bleu.

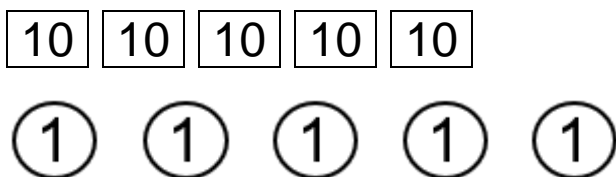
Exemple : 22



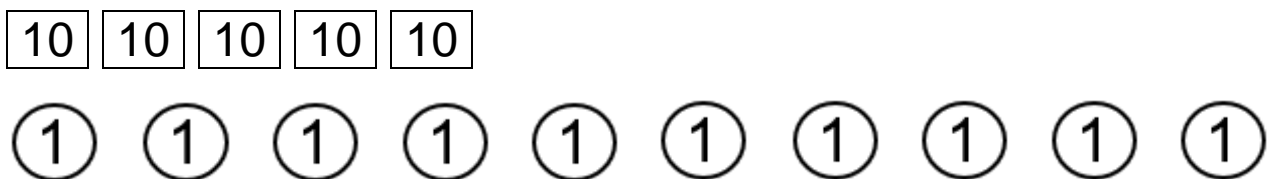
23




25



26

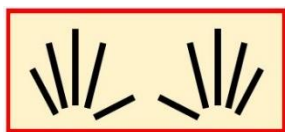


28



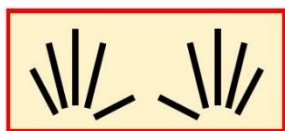


6 Combien ça fait ? Entoure le bon nombre.

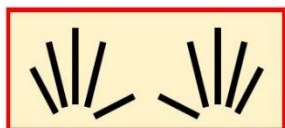


24

27

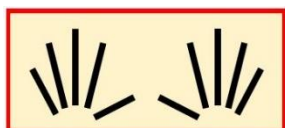


29




28

21




25

7 Combien ça fait ? Entoure le bon nombre.




20

22





24



28

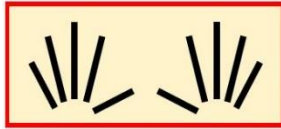
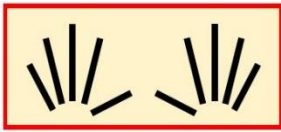
23

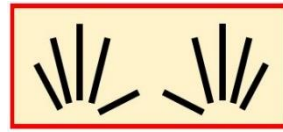


26



8 Combien ça fait ? Écris le bon nombre :





9 Combien ça fait ? Écris le bon nombre

