
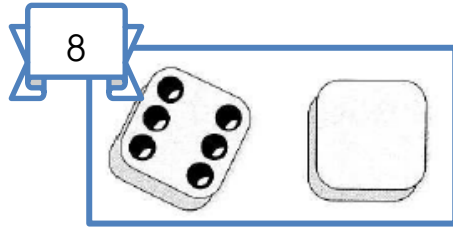



Écris le nombre de dessins cachés et **complète** l'addition à trou :




$$4 + \dots = 6$$



$$6 + \dots = 8$$



$$9 + \dots = 14$$



$$10 + \dots = 16$$

**Complète** les additions avec les nombres :

$$5 + \dots = 8$$

$$10 + \dots = 17$$

$$10 + \dots = 12$$

$$22 + \dots = 26$$

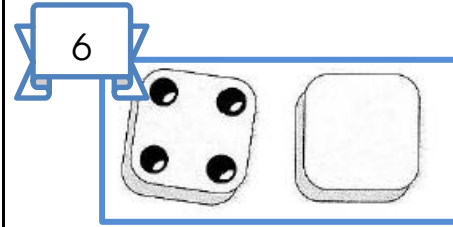
$$11 + \dots = 14$$

$$35 + \dots = 38$$

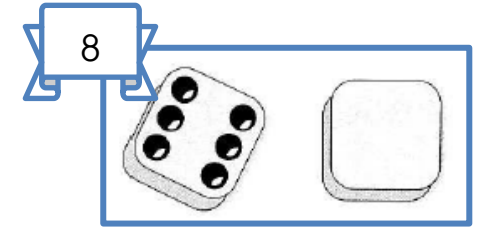
$$14 + \dots = 18$$

$$40 + \dots = 42$$


Écris le nombre de dessins cachés et **complète** l'addition à trou :




$$4 + \dots = 6$$



$$6 + \dots = 8$$



$$9 + \dots = 14$$



$$10 + \dots = 16$$

**Complète** les additions avec les nombres :

$$5 + \dots = 8$$

$$10 + \dots = 17$$

$$10 + \dots = 12$$

$$22 + \dots = 26$$

$$11 + \dots = 14$$

$$35 + \dots = 38$$

$$14 + \dots = 18$$

$$40 + \dots = 42$$