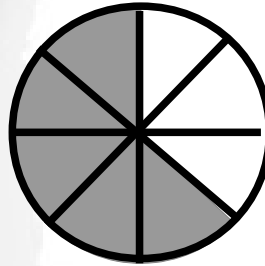
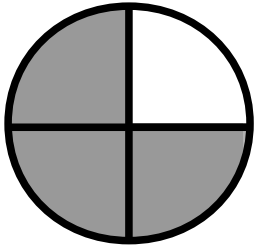
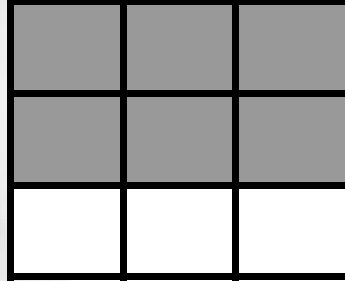
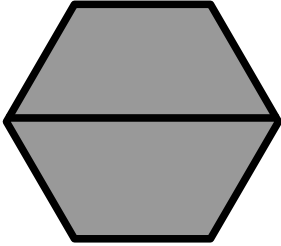
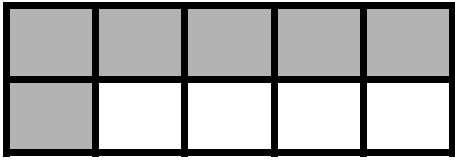


Ecris les fractions.

SCORE


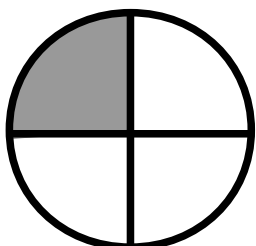
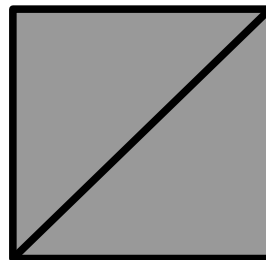
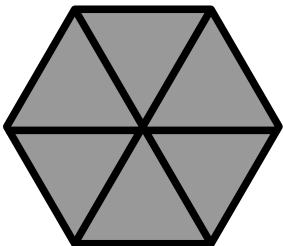
/20



Ecris les fractions.

SCORE

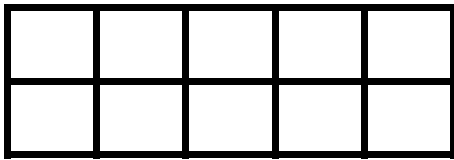
/20



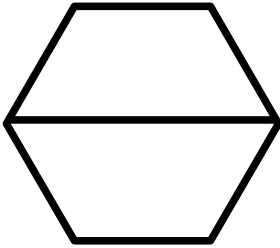
Colorie les fractions.

SCORE

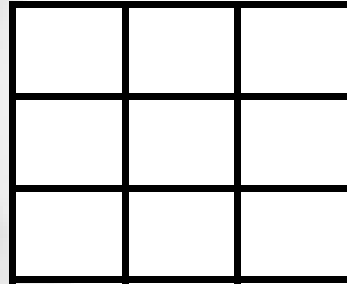
/20




▶ $\frac{9}{10}$




▶ $\frac{1}{2}$



▶ $\frac{4}{9}$



▶ $\frac{3}{4}$

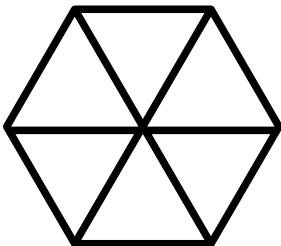


▶ $\frac{6}{8}$

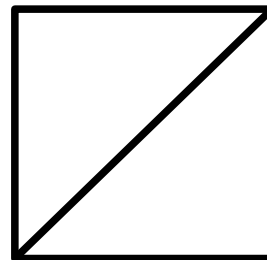
Colorie les fractions.

SCORE

/20




▶ $\frac{3}{6}$



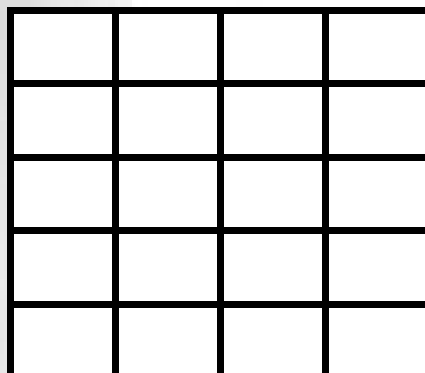
▶ $\frac{2}{2}$



▶ $\frac{2}{6}$



▶ $\frac{3}{4}$

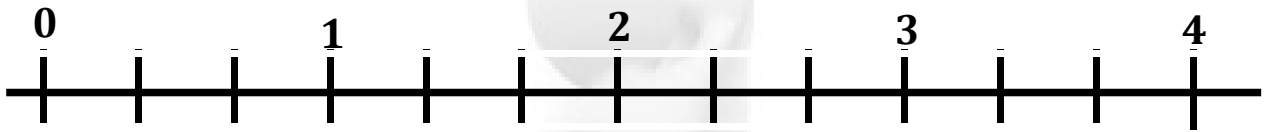


▶ $\frac{10}{20}$


Place les fractions : $\frac{1}{3}$ $\frac{3}{3}$ $\frac{7}{3}$ $\frac{10}{3}$ $\frac{12}{3}$

SCORE

/20



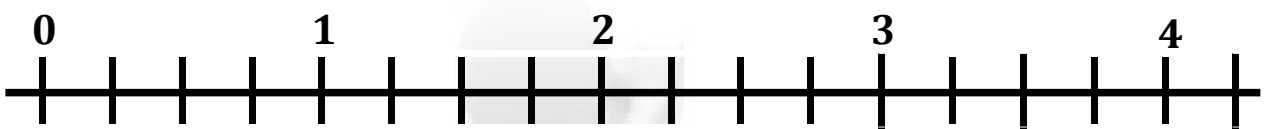
Place les fractions : $\frac{1}{5}$ $\frac{3}{5}$ $\frac{7}{5}$ $\frac{10}{5}$ $\frac{15}{5}$



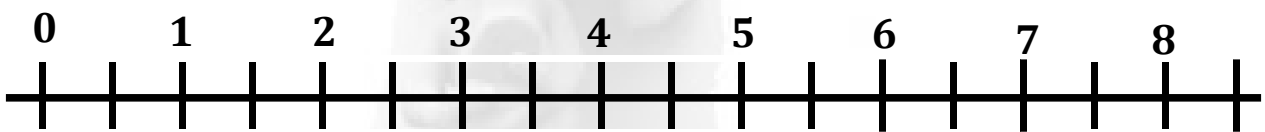
Place les fractions : $\frac{1}{4}$ $\frac{3}{4}$ $\frac{8}{4}$ $\frac{11}{4}$ $\frac{16}{4}$

SCORE

/20



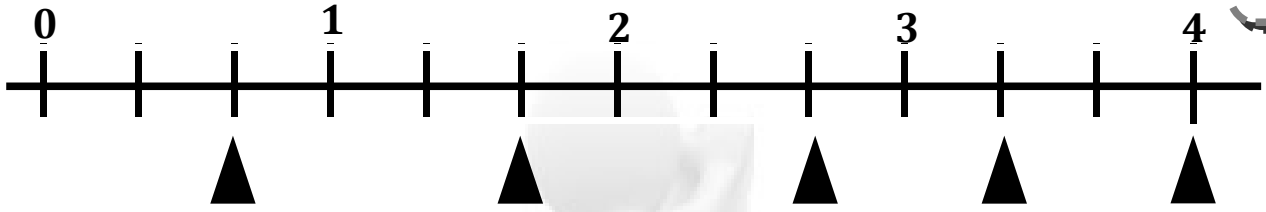
Place les fractions : $\frac{1}{2}$ $\frac{3}{2}$ $\frac{8}{2}$ $\frac{11}{2}$ $\frac{16}{2}$



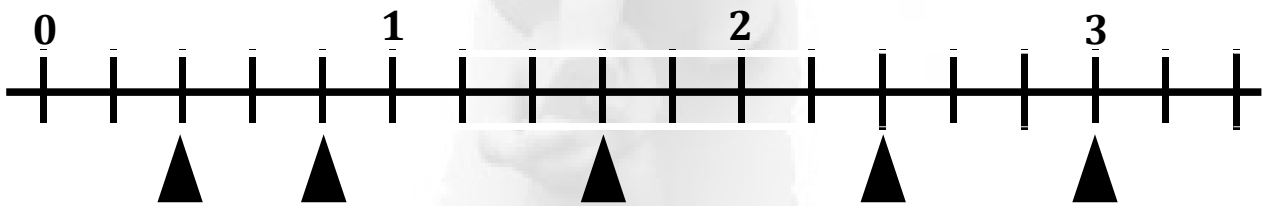
Ecris les fractions :

SCORE

/20



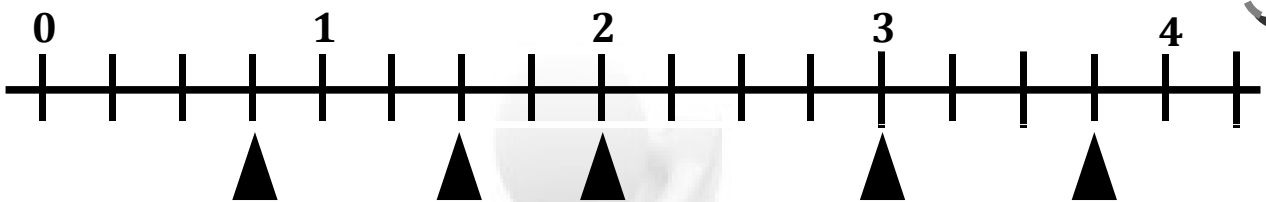
Ecris les fractions :



Ecris les fractions :

SCORE

/20



Ecris les fractions :

