

# Evaluation Calcul

## Additions et soustractions de dizaines

Compétences évaluées	Atteint	Partiellement Atteint	Non Atteint
Calculer avec des nombres entiers			

### 1 Calcule.

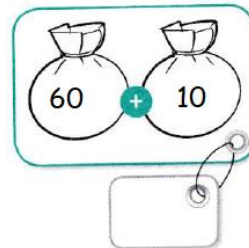
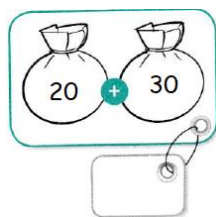
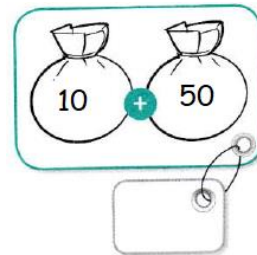
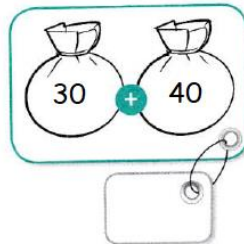
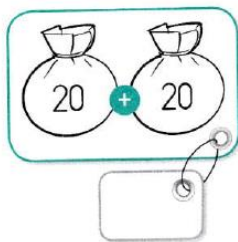
$$10 + 10 + 10 + 10 =$$

$$10 + 10 + 10 + 10 + 10 + 10 + 10 =$$

$$10 + 10 + 10 + 10 + 10 =$$

$$10 + 10 + 10 + 10 + 10 + 10 + 10 + 10 =$$

### 2 Complète les étiquettes.



### 3 Calcule

$$10 + 10 + 10 + 5 =$$

$$1 + 50 =$$

$$10 + 10 + 10 + 10 + 10 + 7 =$$

$$40 + 2 =$$

$$30 + 8 =$$

$$7 + 60 =$$

$$60 + 7 =$$

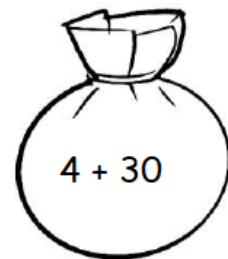
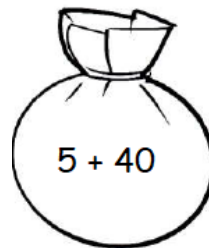
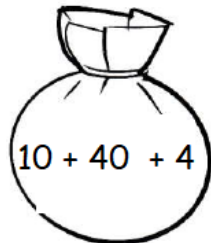
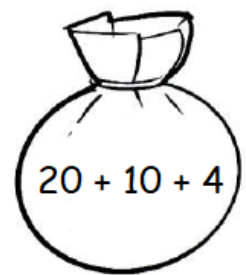
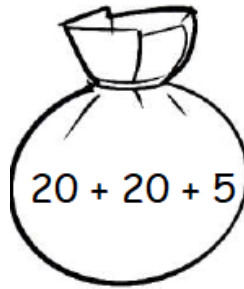
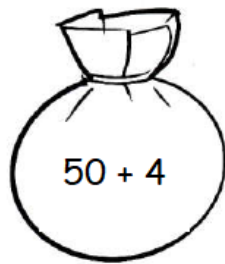
$$20 + 20 + 3 =$$

4 Colorie selon le code couleur.

54 jaune

45 vert

34 bleu



5 Calcule avec les dizaines entières.

$$20 - 10 =$$

$$40 - 30 =$$

$$30 - 20 =$$

$$80 - 30 =$$

$$70 - 10 =$$

$$60 - 10 =$$

6 Calcule avec les unités.

$$28 - 10 =$$

$$57 - 10 =$$

$$88 - 40 =$$

$$59 - 20 =$$

$$85 - 30 =$$

$$76 - 50 =$$

7 Relie les gâteaux à leur résultat.

28

38

48

