



lundi mardi mercredi jeudi vendredi samedi dimanche



/ /

1 Découpe et calcule :

$3+2=5$

$14 + 25$
 $10 + 4 + 20 + 5$
 $= 30 + 9 = 39$

$25 + 32$
 $\square + \square + \square + \square$
 $= \square + \square = \square$

$17 + 43$
 $\square + \square + \square + \square$
 $= \square + \square = \square$

$31 + 22$

$\square + \square + \square + \square$
 $= \square + \square = \square$

$43 + 23$

$\square + \square + \square + \square$
 $= \square + \square = \square$

$13 + 56$

$\square + \square + \square + \square$
 $= \square + \square = \square$

2 Calcule de la même façon :

$3+2=5$

$24 + 35$

$= 20 + 4 + 30 + 5$
 $= 50 + 9 = 59$

$14 + 64$

$= \square + \square + \square + \square$
 $= \square + \square = \square$

$21 + 45$

$= \square + \square + \square + \square$
 $= \square + \square = \square$

$12 + 35$

$= \square + \square + \square + \square$
 $= \square + \square = \square$

$51 + 22$

$= \square + \square + \square + \square$
 $= \square + \square = \square$

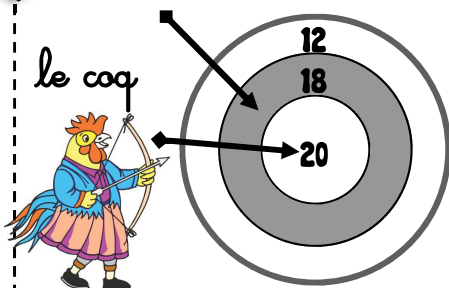
$34 + 23$

$= \square + \square + \square + \square$
 $= \square + \square = \square$


3 Calcule le nombre de points de chaque personnage et indique qui a gagné :

$3+2=5$

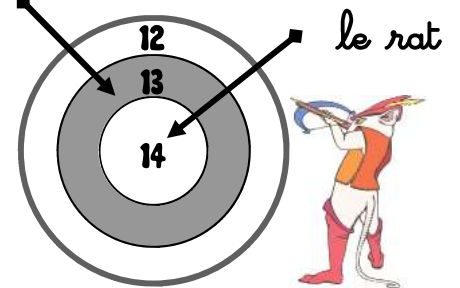
C'est qui a gagné.



$\square + \square + \square = \square$



$\square + \square + \square = \square$



$\square + \square + \square = \square$



lundi mardi mercredi jeudi vendredi samedi dimanche



/ /

1 Découpe et calcule :

$3+2=5$

$14 + 25$
 $10 + 4 + 20 + 5$
 $= 30 + 9 = 39$

$15 + 42$
 $\square + \square + \square + \square$
 $= \square + \square = \square$

$45 + 23$
 $\square + \square + \square + \square$
 $= \square + \square = \square$

$34 + 21$
 $\square + \square + \square + \square$
 $= \square + \square = \square$

$43 + 16$
 $\square + \square + \square + \square$
 $= \square + \square = \square$

$31 + 36$
 $\square + \square + \square + \square$
 $= \square + \square = \square$

2 Calcule de la même façon :

$3+2=5$

$24 + 35$
 $= 20 + 4 + 30 + 5$
 $= 50 + 9 = 59$

$17 + 22$
 $= \square + \square + \square + \square$
 $= \square + \square = \square$

$14 + 35$
 $= \square + \square + \square + \square$
 $= \square + \square = \square$

$23 + 36$
 $= \square + \square + \square + \square$
 $= \square + \square = \square$

$57 + 32$
 $= \square + \square + \square + \square$
 $= \square + \square = \square$

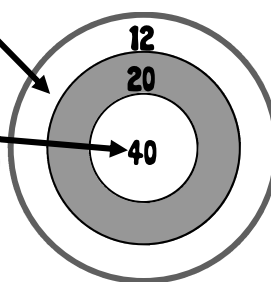
$31 + 28$
 $= \square + \square + \square + \square$
 $= \square + \square = \square$

3 Calcule le nombre de points de chaque personnage et indique qui a gagné :

$3+2=5$

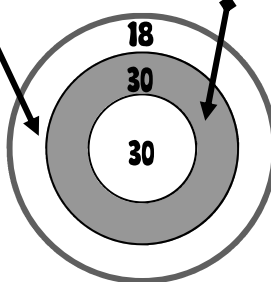
C'est qui a gagné.

le coq



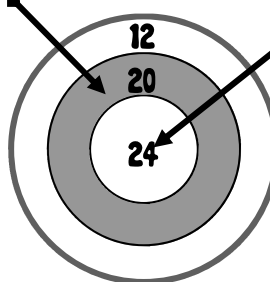
$\square + \square + \square = \square$

l'âne



$\square + \square + \square = \square$

le rat



$\square + \square + \square = \square$