







Combien d'ours



CAHIER







de

MATH

boucle d'or


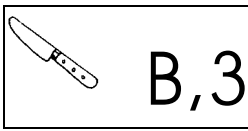

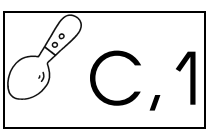
prénom :

§ complète le tableau



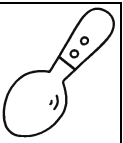







% colle les images dans les endroits indiqués dans le tableau


 A,4	 B,3	 D,2	 C,1
---	---	---	---

	A	B	C	D
1				
2				
3				
4				



	A	B	C	D
1				
2				
3				
4				

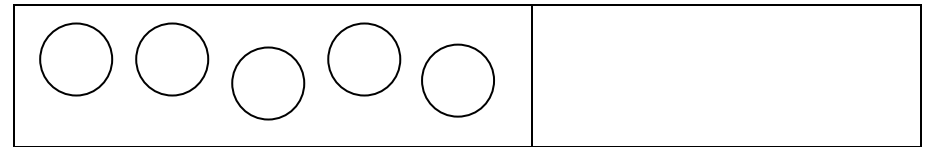
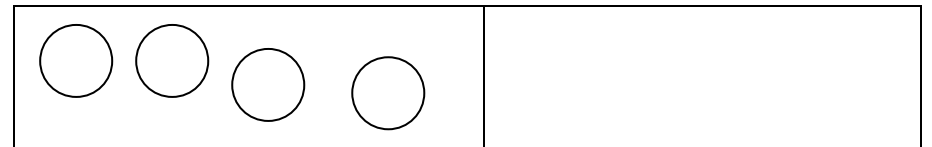

'...."	'....'
,....	,....



Chaque ours a 10 bonbons dans sa boîte, dessine ceux qui sont cachés



3



Dessine le nombre d'assiettes indiqué par les dés

--	--	--

--	--	--

--	--	--

--	--	--

--	--	--

--	--	--



Choisis une couleur pour chaque nombre

7	8	9	10
---	---	---	----



complète

1		3	4	5	6	7		9	10
---	--	---	---	---	---	---	--	---	----

1	2			5		7	8		10
---	---	--	--	---	--	---	---	--	----

1		3		5	6	7	8	9	
---	--	---	--	---	---	---	---	---	--

1		3	4	5		7		9	10
---	--	---	---	---	--	---	--	---	----


	2	3	4		6		8	9	
--	---	---	---	--	---	--	---	---	--

1	2			5	6	7	8		10
---	---	--	--	---	---	---	---	--	----

	2	3	4	5		7	8	9	
--	---	---	---	---	--	---	---	---	--

	2	3	4	5		7	8	9	
--	---	---	---	---	--	---	---	---	--

	2	3	4	5		7	8	9	
--	---	---	---	---	--	---	---	---	--



complète

	8	
--	---	--

	6	
--	---	--

		3
--	--	---

		4
--	--	---

	2	
--	---	--

5		
---	--	--

	4	
--	---	--

		9
--	--	---

	7	
--	---	--

		10
--	--	----

	5	
--	---	--

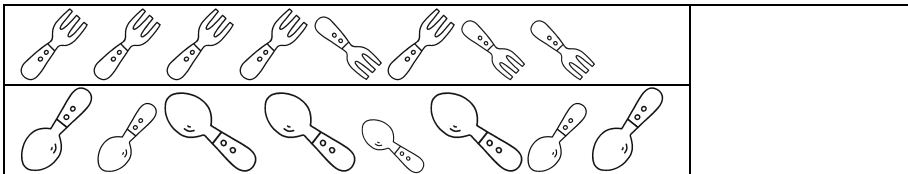
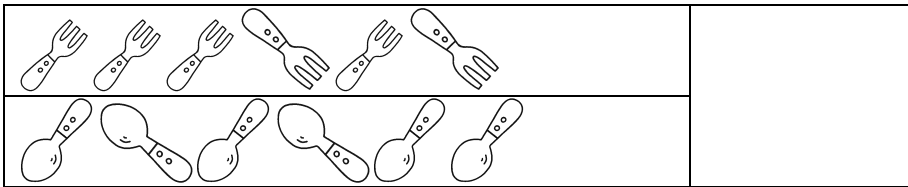
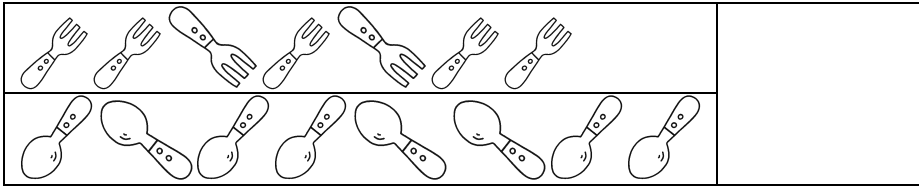
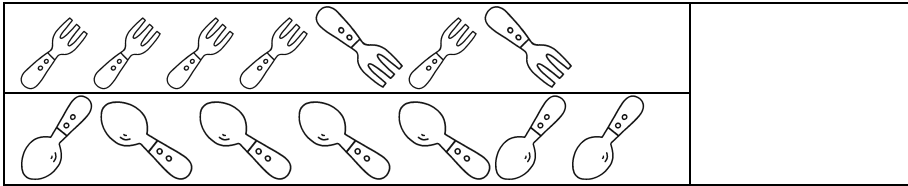
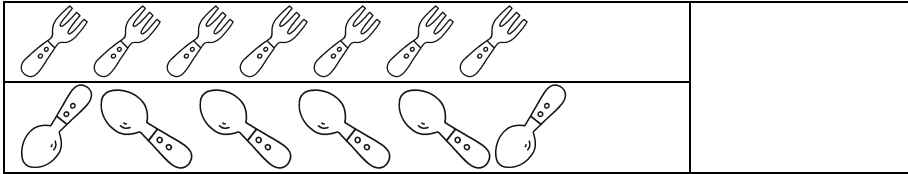
	9	
--	---	--




Y a-t-il autant de cuillères que de fourchettes

OUI

NON



Éléments à découper §



%

