



MES PREMIERES ADDITIONS


Dessine les points sur chaque coccinelle pour t'aider à résoudre ces additions.




$3 + 2 = \dots\dots$




$5 + 1 = \dots\dots$




$5 + 4 = \dots\dots$




$0 + 4 = \dots\dots$




$3 + 3 = \dots\dots$




$5 + 2 = \dots\dots$




$7 + 2 = \dots\dots$



$1 + 4 = \dots\dots$



$4 + 3 = \dots\dots$



$1 + 2 = \dots\dots$

A ton tour d'écrire les additions.



.....



.....



.....



.....



.....



.....



.....



.....



.....



.....

