


Commutativité de l'addition

Observe les images et écris un calcul qui correspond: les fleurs




$$\dots + \dots = \dots$$




$$\dots + \dots = \dots$$

Observe les images et écris un calcul qui correspond: les oiseaux




$$\dots + \dots = \dots$$




$$\dots + \dots = \dots$$

Observe les images et écris un calcul qui correspond: les pailles



$$\dots + \dots = \dots$$



$$\dots + \dots = \dots$$

Écris le calcul inversé

$$2 + 6 = 8$$

$$\dots + \dots = \dots$$

$$4 + 6 = 10$$

$$\dots + \dots = \dots$$

$$1 + 5 = 6$$

$$\dots + \dots = \dots$$

$$1 + 7 = 8$$

$$\dots + \dots = \dots$$

$$7 + 2 = 9$$

$$\dots + \dots = \dots$$

$$2 + 3 = 5$$

$$\dots + \dots = \dots$$