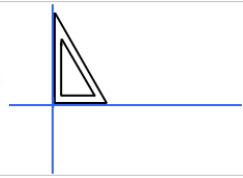
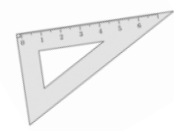

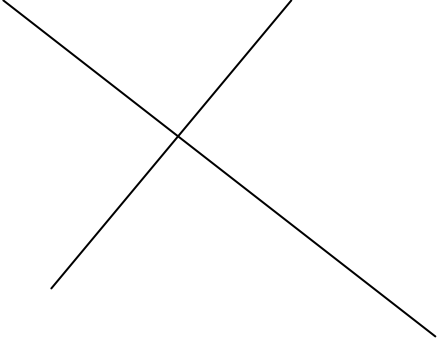
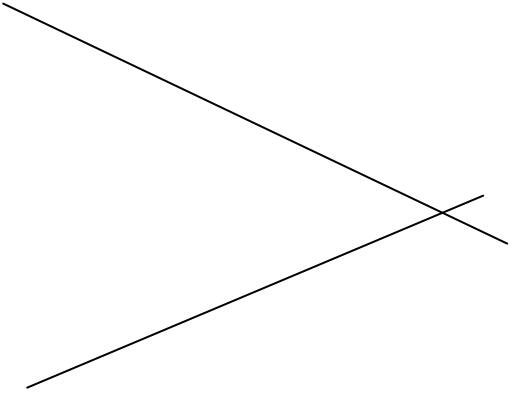
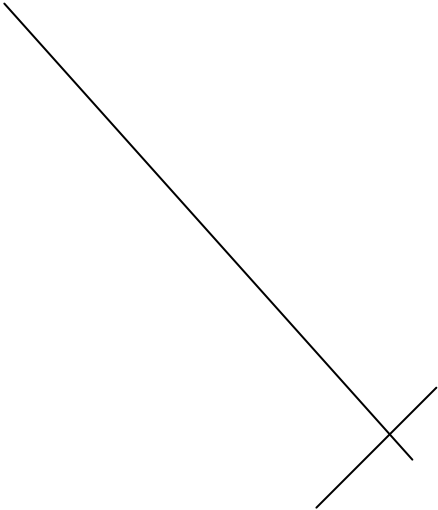
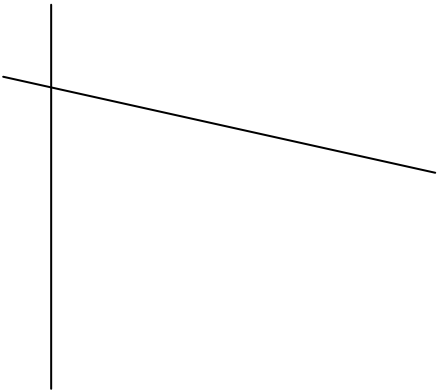



CAP_Fiches géométrie JH - Droites perpendiculaires

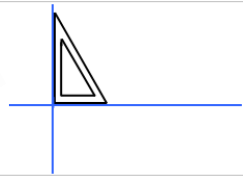
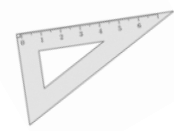
Deux droites sont **perpendiculaires** si elles se coupent en formant **un angle droit**.



Entoure les droites perpendiculaires.

<p>A</p> 	<p>B</p> 
<p>C</p> 	<p>D</p> 
<p>E</p> 	<p>F</p> 

CAP_Fiches géométrie JH - Droites perpendiculaires



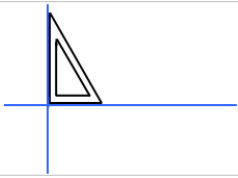
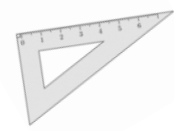
Deux droites sont **perpendiculaires** si elles se coupent en formant **un angle droit**.

--	--

Entoure les droites perpendiculaires.

A 	B
C 	D
E 	F

CAP_Fiches géométrie JH - Droites perpendiculaires



Deux droites sont **perpendiculaires** si elles se coupent en formant **un angle droit**.

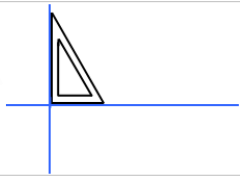
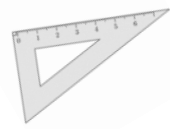
--	--

Entoure les droites perpendiculaires.

A 	B
C 	D
E 	F

CAP_Fiches géométrie JH - Droites perpendiculaires

Deux droites sont **perpendiculaires** si elles se coupent en formant **un angle droit**.



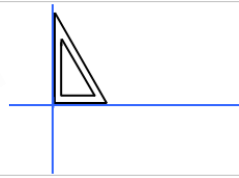
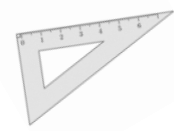
<hr/>	
-------	--

Entoure les droites perpendiculaires.

A 	B
C 	D
E 	F

CAP_Fiches géométrie JH - Droites perpendiculaires

Deux droites sont **perpendiculaires** si elles se coupent en formant **un angle droit**.



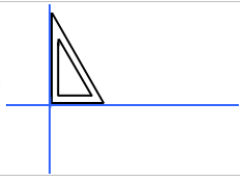
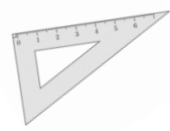
--	--

Entoure les droites perpendiculaires.

A 	B
C 	D
E 	F

CAP_Fiches géométrie JH - Droites perpendiculaires

Deux droites sont **perpendiculaires** si elles se coupent en formant **un angle droit**.

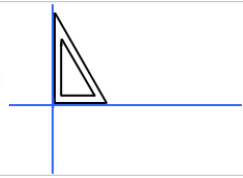
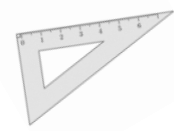


--	--

Entoure les droites perpendiculaires.

A 	B
C 	D
E 	F

CAP_Fiches géométrie JH - Droites perpendiculaires



Deux droites sont **perpendiculaires** si elles se coupent en formant **un angle droit**.


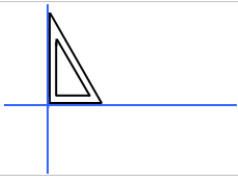
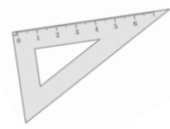
--	--

Entoure les droites perpendiculaires.

A 	B
C 	D
E 	F

CAP_Fiches géométrie JH - Droites perpendiculaires

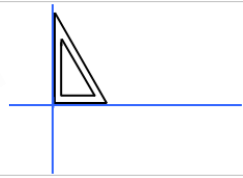
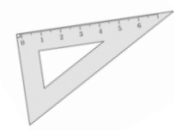
Deux droites sont **perpendiculaires** si elles se coupent en formant **un angle droit**.



Entoure les droites perpendiculaires.

<p>A</p>	<p>B</p>
<p>C</p>	<p>D</p>

CAP_Fiches géométrie JH - Droites perpendiculaires



Deux droites sont **perpendiculaires** si elles se coupent en formant **un angle droit**.

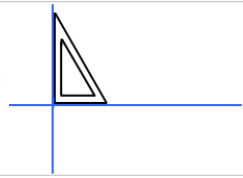
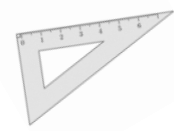
E 	F
--------------	--------------

Entoure les droites perpendiculaires.

A 	B
C 	D

CAP_Fiches géométrie JH - Droites perpendiculaires

Deux droites sont **perpendiculaires** si elles se coupent en formant **un angle droit**.

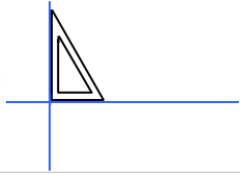
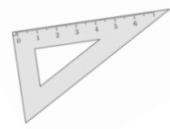


E 	F

Entoure les droites perpendiculaires.

A 	B
C 	D

CAP_Fiches géométrie JH - Droites perpendiculaires



Deux droites sont **perpendiculaires** si elles se coupent en formant **un angle droit**.

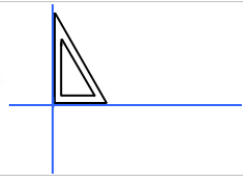
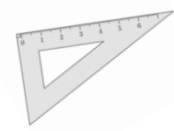
E 	F

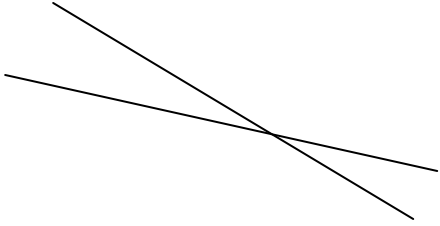

Entoure les droites perpendiculaires.

A 	B
C 	D

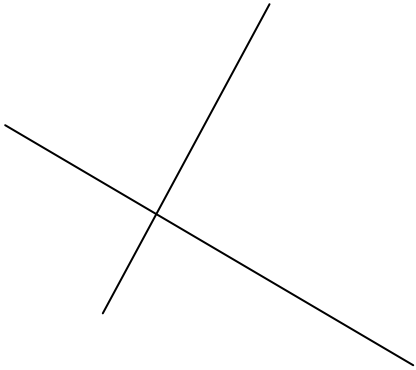
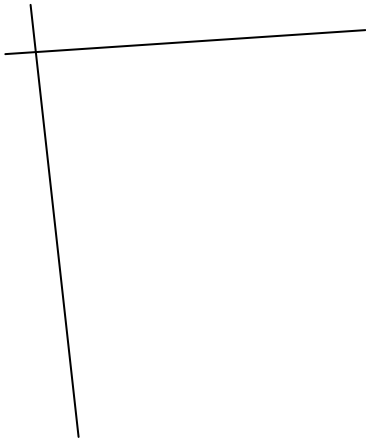
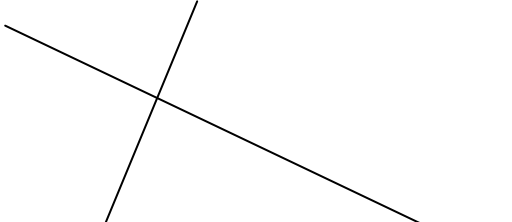
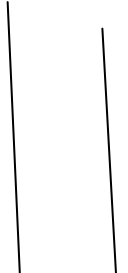
CAP_Fiches géométrie JH - Droites perpendiculaires

Deux droites sont **perpendiculaires** si elles se coupent en formant **un angle droit**.



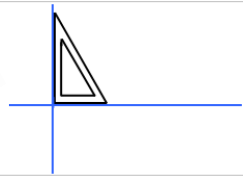
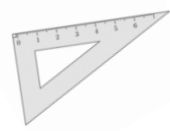
E 	F 

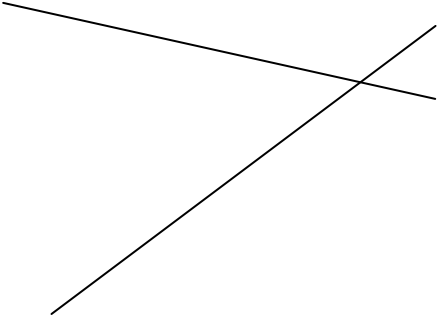
Entoure les droites perpendiculaires.

A 	B 
C 	D 

CAP_Fiches géométrie JH - Droites perpendiculaires

Deux droites sont **perpendiculaires** si elles se coupent en formant **un angle droit**.



E 	F 