
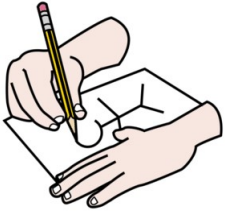



Le vélo de Lila coûte 98€. Le vélo de Marie
coûte 20€ de moins.

Combien coûte le vélo de Marie ?



+


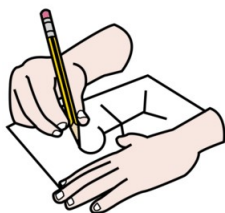
-



Il

Pour le pique-nique, Mamie a acheté 4 tranches de jambons à 2€, 500g de fromage à 3€ et 250g de tomates cerises à 2€.

Combien Mamie a-t-elle dépensé pour le pique-nique ?



+


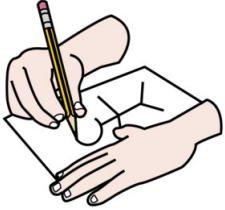
-



Mamie


Dans la salle de cinéma, il y a 84 places assises. 52 places sont occupées.

Combien y a-t-il de places vides ?



+

-




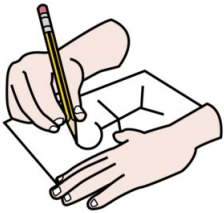
Il y a

Martin a 76 billes. Pendant la récréation, il




perd 25 billes.

Combien a-t-il de billes maintenant ?



+

-




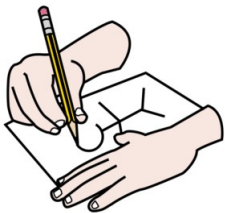
Il a

Martin a 75 billes. Pendant la récréation, il




perd 12 billes puis encore 10 billes.

Combien a-t-il de billes maintenant ?



+

-



.....


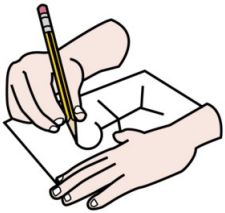
Il a

Martin a 62 billes. Pendant la récréation, il




gagne 20 billes puis il en perd 12.

Combien a-t-il de billes maintenant ?



+

-




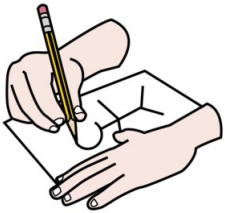
Il a

Martin a 54 billes. Pendant la récréation, il




gagne 11 billes puis il en perd 8.

Combien a-t-il de billes maintenant ?



+

-


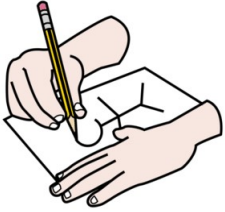


Il a

Almira veut préparer 5 bouquets de 6 fleurs.




Combien de fleurs doit-elle acheter ?



+

-

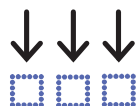


Elle

Emilie a préparé 26 petits gâteaux pour

Jonas, Alicia, Zenepa, Yanis, Haroun et

Almira.



Combien chacun aura-t-il de gâteaux ?



+

-




Chacun


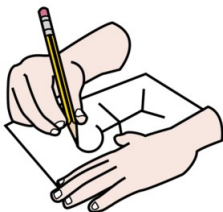
Emilie a acheté **des** crayons à 24€, de la



peinture à 16€ **et des** gommettes à 5€,




Combien a-t-elle dépensé ?



+

-



Il y a


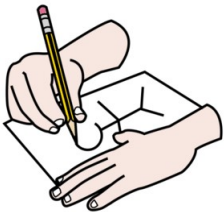
Papy a offert 50€ à Malik pour son



anniversaire. Il achète un jeu à 20€,




Combien lui reste-il ?



+

-

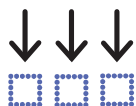


Il y a

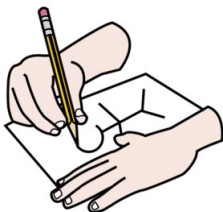
Maman a acheté une paire de chaussures à



20€ à chacun de ses enfants.



Combien Maman a-t-elle dépensé ?




+

-



Il y a

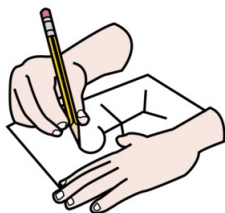
Dans le jardin, Papy a planté 3 rangées de 10



salades.

Combien Papy a-t-il planté de salades en

tout ?



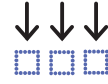
+

-


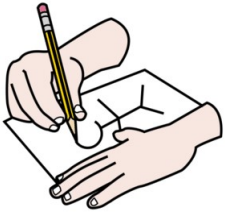
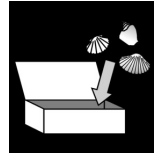


Il a

J'ai une collection de 10 livres. Chaque livre coûte 5€.




Combien coûte ma collection ?



+

-




.....

Elle

Pour la bibliothèque de la classe, la maitresse


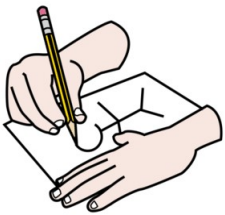


comm^ande 5 livres à 10€ ^et 2 dictionn^aires à




20€.

Combien a-t-elle dépensé ?



+

-



Elle a

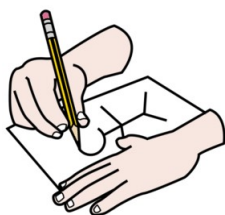
Pour le dessert, **W**atik a préparé une salade



de fruits. Il découpe 10 fraises, 3 oranges, 1

ananas et 4 pêches.

Combien a-t-il découpé de fruits ?



+

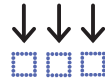
-



Il y a

Samedi **soir**, **nous** avons comman**dé** 2


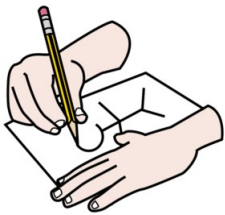

pizzas. Maman a coupé chaque pizza **en** 8



parts.




Combien y a-t-il de parts **au** total ?



+

-

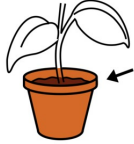


Il y a


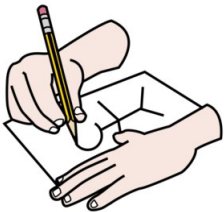
Le jardinier a planté 8 tulipes dans chacun



des 4 bacs du jardin.




Combien de tulipes a-t-il planté en tout ?



+

-




Il y a

Safia **est** malade. Le médecin lui dit de

prendre 4 cachets par jour pendant une




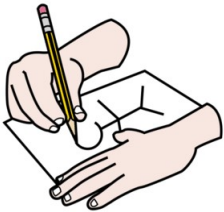
semaine.



Combien le pharmacien doit-il donner de




cachets à Safia ?



+

-



.....

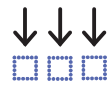
Il doit

Il y a 24 élèves dans la classe de CM1.


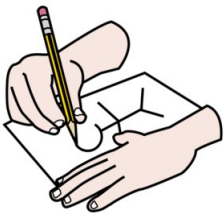
Pendant l'EPS, la maîtresse forme 4 équipes.



Combien y a-t-il de joueurs dans chaque




équipe ?



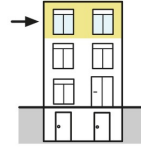
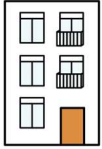
+

-

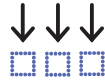


Il y a


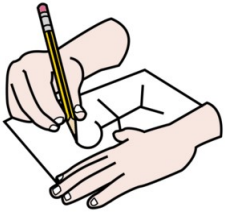
L'immeuble où je vis a 4 étages. Il y a 5



fenêtres à chaque étage.




Combien y a-t-il de fenêtres **dans** cet
immeuble ?



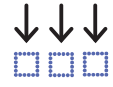
+

-



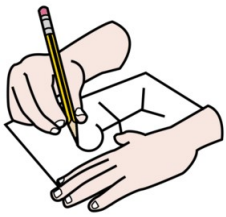


Il y a

Pour la sortie de fin d'année, la directrice a réservé 2 bus. Il y a 46 élèves dans chaque bus.




Combien y a-t-il d'élèves en tout ?



+

-




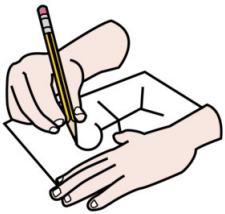
Il y a

J'ai 125 autocollants. J'en colle 25 dans mon




cahier.

Combien me reste-il d'autocollants ?



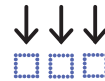
+

-

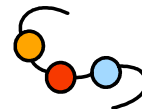


Il

Anna veut faire 4 colliers avec chacun 2


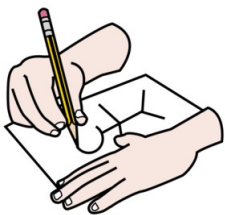


perles bleues, 3 perles vertes et 1 perle



jaune.

Combien lui faut-il de perles en tout ?



+

-



Il