












# Compléments à dix

	 $9 + ? = 10$	 $2 + ? = 10$	
 $4 + ? = 10$	<p>1</p> <p>6</p>	<p>8</p> <p>7</p>	 $3 + ? = 10$
 $7 + ? = 10$	<p>3</p> <p>2</p>	<p>4</p> <p>5</p>	 $6 + ? = 10$
	 $8 + ? = 10$	 $5 + ? = 10$	