

# FICHE D'EXERCICES

## Calcule.

$2 + 7 = \underline{\quad}$

$2 + 5 = \underline{\quad}$

$4 - 2 = \underline{\quad}$

$9 - 2 = \underline{\quad}$

$5 + 3 = \underline{\quad}$

$3 + 6 = \underline{\quad}$

$5 - 2 = \underline{\quad}$

$8 - 4 = \underline{\quad}$

$2 + 8 = \underline{\quad}$

$4 + 3 = \underline{\quad}$

$7 - 3 = \underline{\quad}$

$10 - 5 = \underline{\quad}$

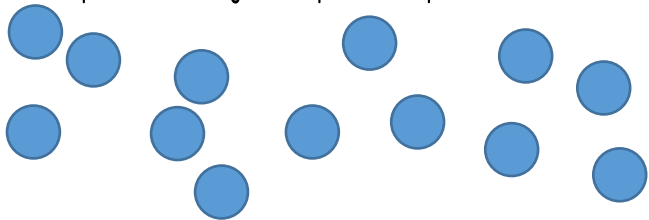
$4 + 4 = \underline{\quad}$

$6 + 4 = \underline{\quad}$

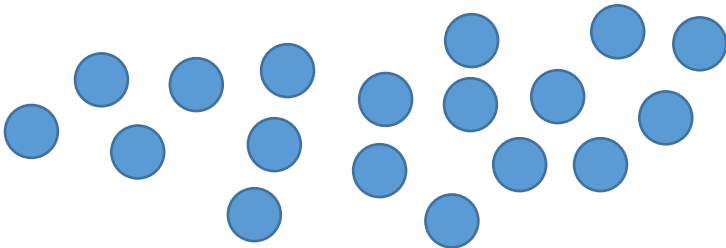
$10 - 4 = \underline{\quad}$

$9 - 3 = \underline{\quad}$

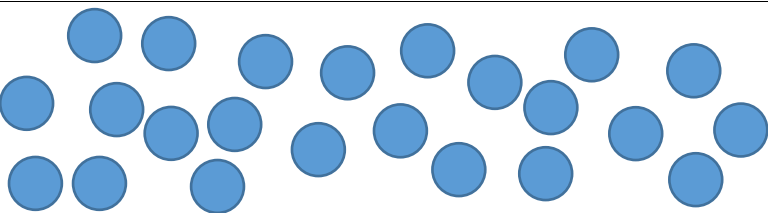
## Compte en groupant par 10.



⇒ \_\_\_\_\_




⇒ \_\_\_\_\_



⇒ \_\_\_\_\_

## Dessine les pièces et les billets.



# FICHE D'EXERCICES

## Calcule.

$2 + 7 = \underline{\quad}$

$2 + 5 = \underline{\quad}$

$4 - 2 = \underline{\quad}$

$9 - 2 = \underline{\quad}$

$5 + 3 = \underline{\quad}$

$3 + 6 = \underline{\quad}$

$5 - 2 = \underline{\quad}$

$8 - 4 = \underline{\quad}$

$2 + 8 = \underline{\quad}$

$4 + 3 = \underline{\quad}$

$7 - 3 = \underline{\quad}$

$10 - 5 = \underline{\quad}$

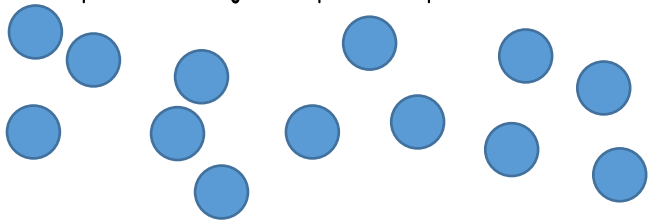
$4 + 4 = \underline{\quad}$

$6 + 4 = \underline{\quad}$

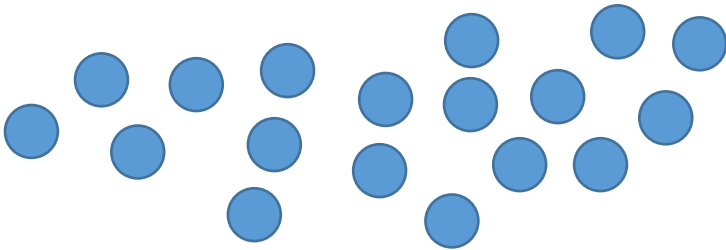
$10 - 4 = \underline{\quad}$

$9 - 3 = \underline{\quad}$

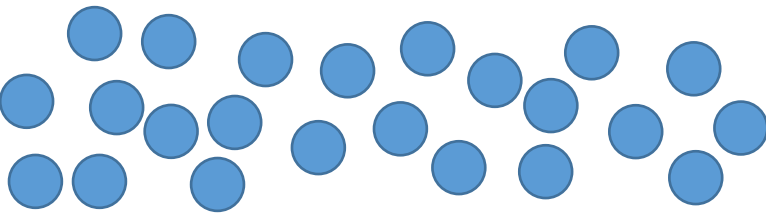
## Compte en groupant par 10.



⇒ \_\_\_\_\_



⇒ \_\_\_\_\_



⇒ \_\_\_\_\_

## Dessine les pièces et les billets.

