




1. Remplis les boîtes de Picbille :


7 + 8 


5 + 9 


8 + 4 


2. Remplis les boîtes de Picbille puis calcule comme la maîtresse :

7 + 6 =  $7 + 3 + 3 = 10 + 3 = 13$


5 + 9 =  $5 + 5 + \underline{\quad} = 10 + \underline{\quad} = \underline{\quad}$

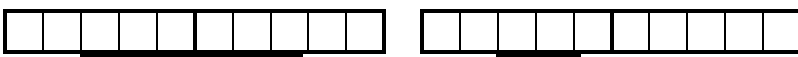
6 + 8 =  $\underline{\quad} + \underline{\quad} + \underline{\quad} = 10 + \underline{\quad} = \underline{\quad}$


4 + 7 =  $\underline{\quad} + \underline{\quad} + \underline{\quad} = \underline{\quad} + \underline{\quad} = \underline{\quad}$


8 + 7 =  $\underline{\quad} + \underline{\quad} + \underline{\quad} = \underline{\quad} + \underline{\quad} = \underline{\quad}$

3. Même exercice :

7 + 9 =  $\underline{\quad} + \underline{\quad} + \underline{\quad} = \underline{\quad} + \underline{\quad} = \underline{\quad}$

5 + 6 =  $\underline{\quad} + \underline{\quad} + \underline{\quad} = \underline{\quad} + \underline{\quad} = \underline{\quad}$

8 + 9 =  $\underline{\quad} + \underline{\quad} + \underline{\quad} = \underline{\quad} + \underline{\quad} = \underline{\quad}$

9 + 9 =  $\underline{\quad} + \underline{\quad} + \underline{\quad} = \underline{\quad} + \underline{\quad} = \underline{\quad}$

4. Calcule comme la maîtresse, mais sans les boîtes de Picbille :

7 + 6 = $7 + 3 + 3 = 10 + 3 = 13$
 3 + 9 = $3 + 7 + \underline{\quad} = \underline{\quad} + \underline{\quad} = \underline{\quad}$
 5 + 9 = $5 + 5 + \underline{\quad} = \underline{\quad} + \underline{\quad} = \underline{\quad}$
 8 + 9 = $\underline{\quad} + \underline{\quad} + \underline{\quad} = \underline{\quad} + \underline{\quad} = \underline{\quad}$
 2 + 9 = $\underline{\quad} + \underline{\quad} + \underline{\quad} = \underline{\quad} + \underline{\quad} = \underline{\quad}$
 6 + 5 = $\underline{\quad} + \underline{\quad} + \underline{\quad} = \underline{\quad} + \underline{\quad} = \underline{\quad}$
 9 + 9 = $\underline{\quad} + \underline{\quad} + \underline{\quad} = \underline{\quad} + \underline{\quad} = \underline{\quad}$