


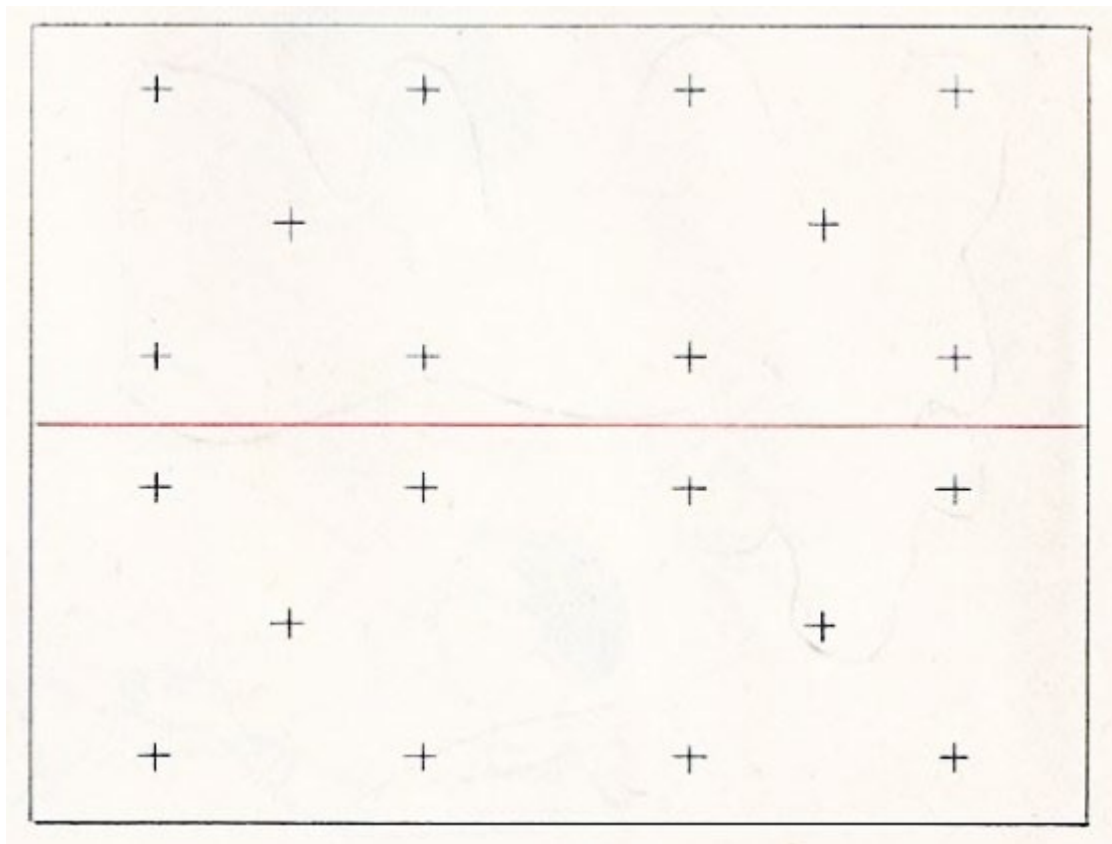


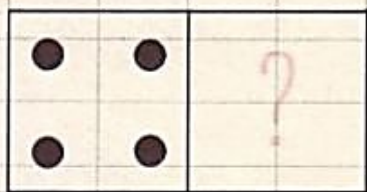
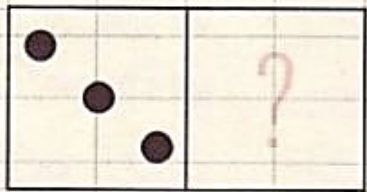
Période 1

6

---


# 6 Manipulations pages





$$\cdot + \cdot = 6$$

$$\cdot + \cdot = 6$$



$$5 + \cdot = 6$$

$$1 + \cdot = 6$$



·



·



+

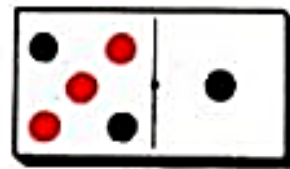
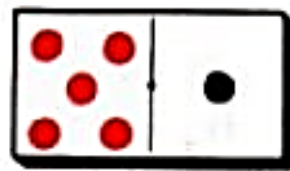
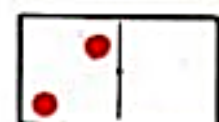
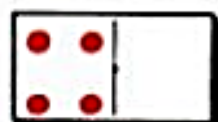
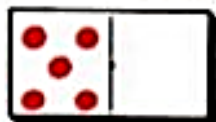
·



+

·

Compléter à 6.  
(Reproduire le premier domino).



5	6	6
+ .....	- .....	- .....
-----	-----	-----
= .....	.....	.....


3	6
+ .....	- .....
-----	-----
.....	.....

4	6	6
+ .....	- .....	- .....
-----	-----	-----
.....	.....	.....

Tu vas maintenant t'entraîner à écrire le chiffre 6. Pour tracer le chiffre 6, tu démarres sur la ligne 2, tu descends en arrondissant jusqu'à la ligne 0, puis tu remontes en enroulant à la ligne 1.



Pour chaque domino écrire l'addition qui convient, ensuite trouver 2 soustractions.



5 + .....

6 - .....

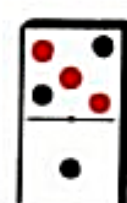
6 - .....



.....

.....

.....



.....

.....

.....

Combien faut-il ajouter pour qu'il y ait 6 œufs dans chaque corbeille ?




5 + ..... = 6 .....




.....




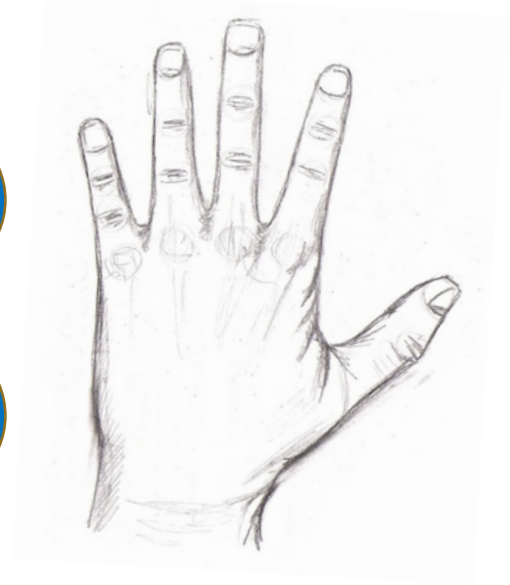
.....

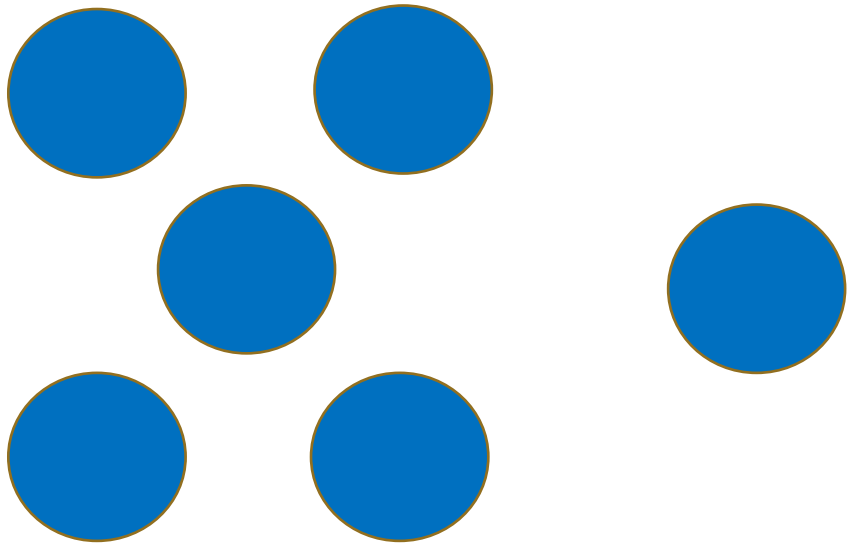


$$4 + 2 = 6$$



$$6 - 2 = 4$$





$$5 + 1 = 6$$

