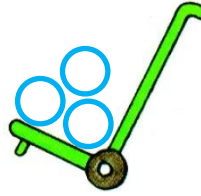
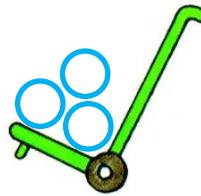


# ADDITIONS < 10


Dessine les jetons dans la boîte et complète l'égalité




$2 + 3 = \dots\dots$




$5 + 3 = \dots\dots$



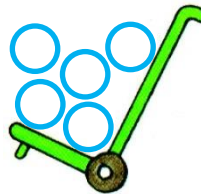
$4 + 2 = \dots\dots$



$5 + 1 = \dots\dots$



$7 + 2 = \dots\dots$



$3 + 5 = \dots\dots$