


Zéro et un

J'écris :

1 _____




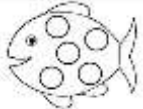


0 _____

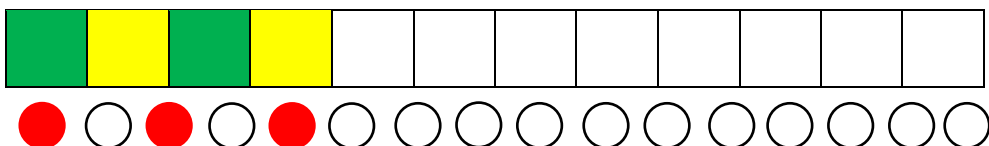
Je dessine :

1	1	0	1	0
				

Les signes + et -

2 _____

			  
$1 + 1 =$ <u> </u>	$2 - 1 =$ <u> </u>	$2 - 2 =$ <u> </u>	$0 + 2 =$ <u> </u>



1 € + 1 € = 2 €

€ _____

Entoure pour payer toujours 2 euros :



Dessine les points du dé :



Frises 0, 1, 2

