

1 Donne la position des petits robots sur la quadrillage.




	1	2	3	4	5
a					
b					
c					
d					
e					


2 Donne la position des petits robots sur le quadrillage.



	1	2	3	4	5
a					
b					
c					
d					
e					


1 Ecris la position de chaque enfant.

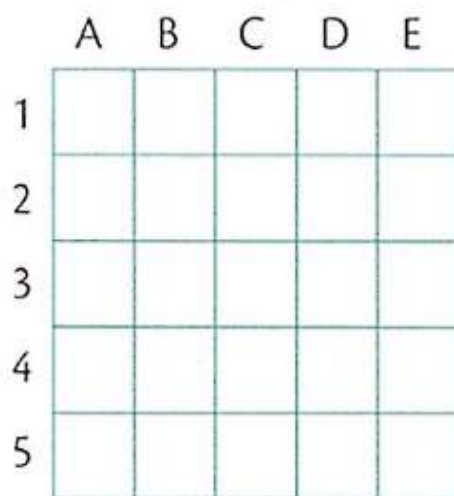


(B,5) (\_\_, \_\_)

(\_\_, \_\_) (\_\_, \_\_)

(\_\_, \_\_) (\_\_, \_\_)

2 Dessine les formes sur le quadrillage.



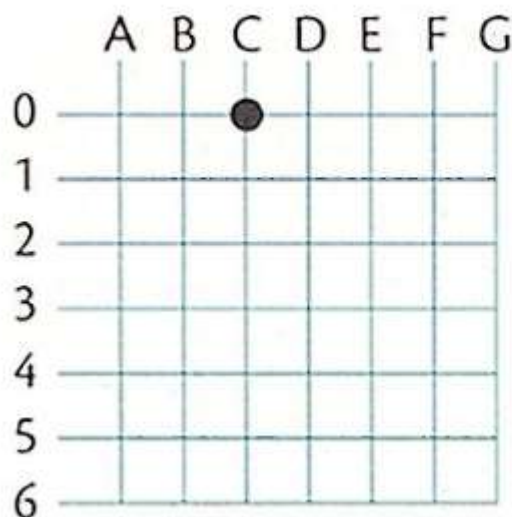
★ (B,2)

□ (A,5)

● (C,5)

△ (D,4)

3 Complète et dessine les formes sur le quadrillage.



● (\_\_, \_\_)

□ (A,1)

★ (E,3)