

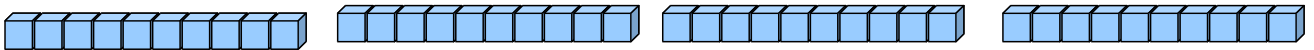
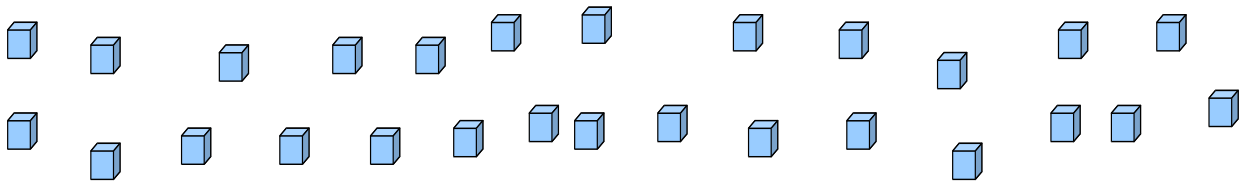
Les nombres dizaines et unités

1) Dessine le nombre 12 de 2 manières différentes.

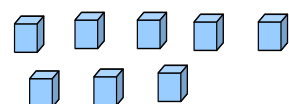
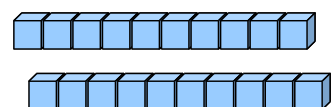
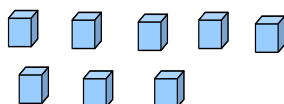
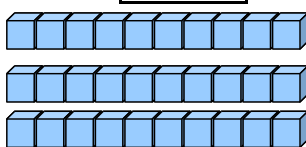
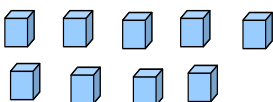
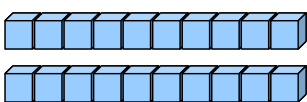
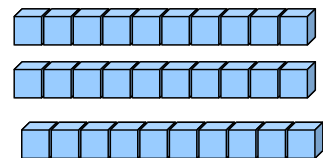
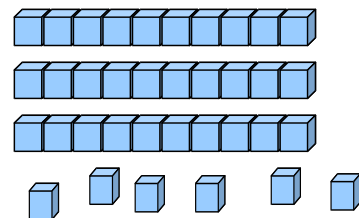
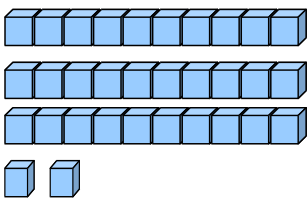
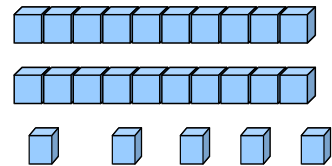
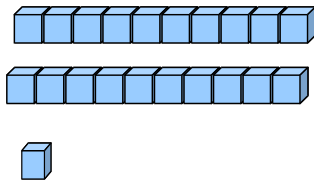
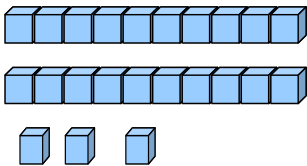
24

36

| | |
|--|--|
| | |
|--|--|

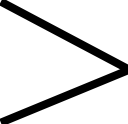


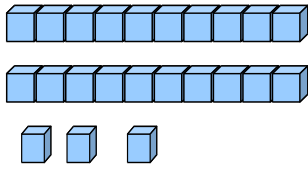
2) Ecris le nombre qui correspond.



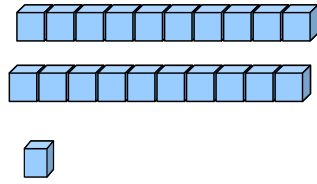
Les nombres dizaines et unités comparer

1) Compare les nombres suivants.


 plus grand



.....




 plus petit

.....

.....

.....

.....

.....

.....

.....

.....

.....

.....

.....

.....

.....

.....

.....

.....

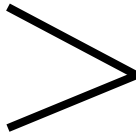
.....

.....


.....

Les nombres dizaines et unités comparer

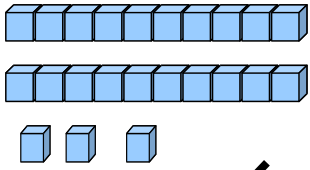
1) Compare les nombres suivants.



plus grand

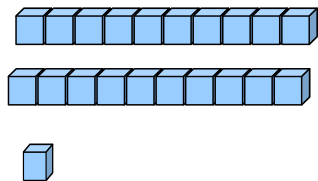


plus petit



/

.....



9

.....

19

21

.....

11

17

.....

7

25

.....

15

14

.....

4

23

.....

13

12

.....

2

27

.....

17

5

.....

15

24

.....

26

6

.....

16

28

.....

23

8

.....

18

21

.....

27

13

.....

3

29

.....

28

11

.....

1

20

.....

30