













Combien y a-t-il de lapins sur chaque ligne ?

1.		3 .	4 ..	5 ...
2.		11 .	10 ..	12 ...
3.		1 .	4 ..	8 ...
4.		3 .	8 ..	6 ...
5.		8 .	11 ..	10 ...
6.		5 .	8 ..	2 ...
7.		9 .	8 ..	2 ...
8.		7 .	8 ..	9 ...
9.		4 .	3 ..	2 ...
10.		8 .	7 ..	9 ...
11.		7 .	8 ..	12 ...
12.		5 .	3 ..	4 ...