


Combien d'os en tout ? *

*

+1




Nurvero

Combien d'os en tout ? *

*

+1



Nurvero

?

0

1



Nurvero

?

1

1



Nurvero

1



2



2



3



3



4



4




5



Combien d'os en tout ? *

*

+2



Nurvero

Combien d'os en tout ? *

*

+2



Nurvero

?

0

2



Nurvero

?

1

2




Nurvero

Combien d'os en tout ? *

*

+3



Nurvero

Combien d'os en tout ? *

*

+3



Nurvero

?

0

3



Nurvero

?

1

3



Nurvero

Combien d'os en tout ? *

*

+4



Nurvero

Combien d'os en tout ? *

*

+4



Nurvero

?

0

4



Nurvero

?

1

4



Nurvero

Combien d'os en tout ? *

*

+5



Nurvero

Combien d'os en tout ? *

*

+5



Nurvero

?

0

5



Nurvero

?

1

5



Nurvero

5



6



3



4



4



5



5




6



Combien d'os en tout ? *

*

+1




Nurvero

Combien d'os en tout ? *

*

+1



Nurvero

?

2

1



Nurvero

?

3

1

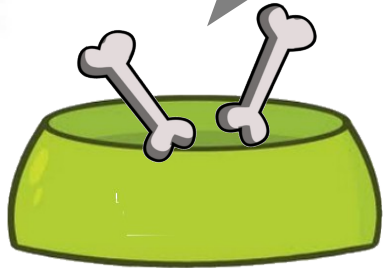


Nurvero

Combien d'os en tout ? *

*

+2

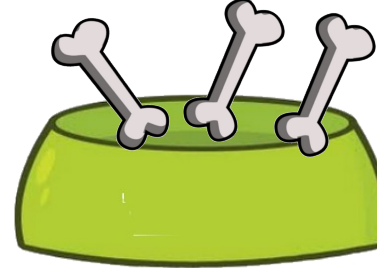


Nurvero

Combien d'os en tout ? *

*

+2



Nurvero

?

2

2



Nurvero

?

3

2

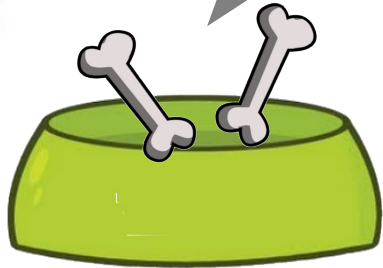


Nurvero

Combien d'os en tout ? *

*

+3

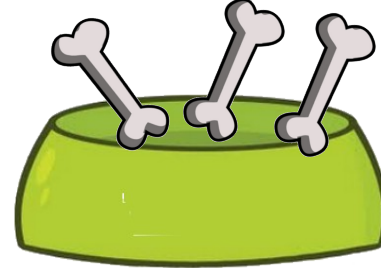


Nurvero

Combien d'os en tout ? *

*

+3



Nurvero

?

2

3



Nurvero

?

3

3

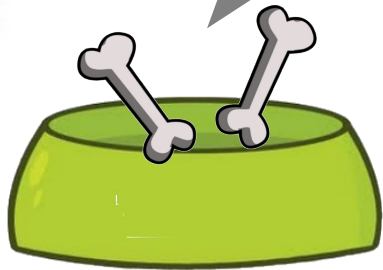


Nurvero

Combien d'os en tout ?

**

+4

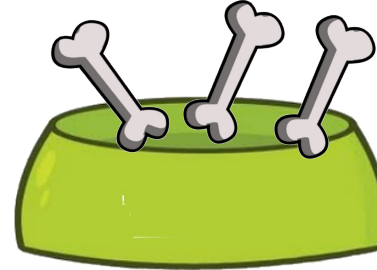


Nurvero

Combien d'os en tout ?

**

+4



Nurvero

?

2

4



Nurvero

?

3

4



Nurvero

6



7



7



8



8



9



9



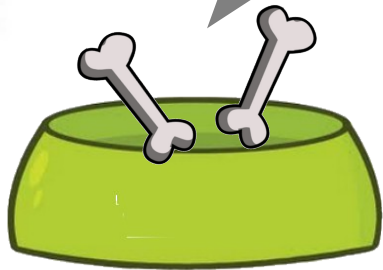
10



Combien d'os en tout ?

**

+5

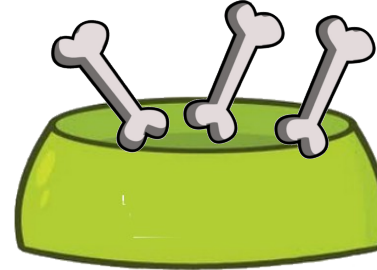


Nurvero

Combien d'os en tout ?

**

+5



Nurvero

?

2

5



Nurvero

?

3

5

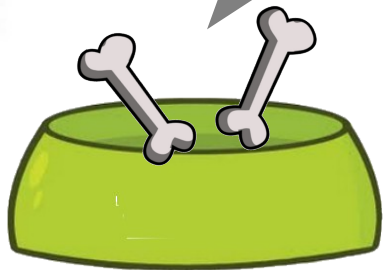


Nurvero

Combien d'os en tout ?

**

+6

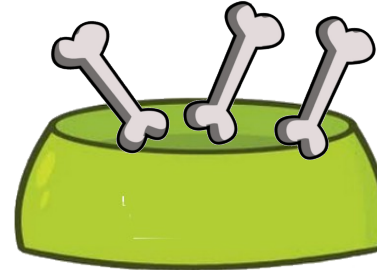


Nurvero

Combien d'os en tout ?

**

+6



Nurvero

?

2

6



Nurvero

?

3

6

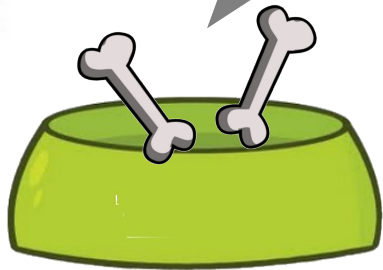


Nurvero

Combien d'os en tout ?

**

+7

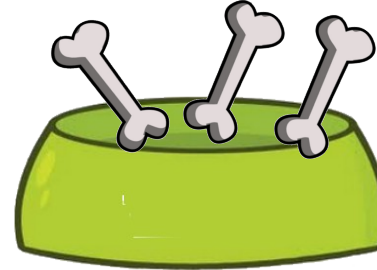


Nurvero

Combien d'os en tout ?

**

+7



Nurvero

?

2

7



Nurvero

?

3

7




Nurvero

Combien d'os en tout ? *

*

+1




Nurvero

Combien d'os en tout ? *

*

+1



Nurvero

?

4

1



Nurvero

?

5

1



Nurvero

5



6



6



7



7



8



8

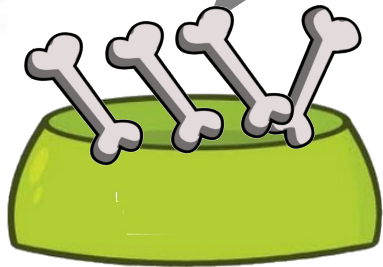


9

Combien d'os en tout ?

**

+2

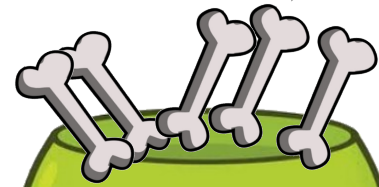


Nurvero

Combien d'os en tout ?

**

+2



Nurvero

?

4

2



Nurvero

?

5

2




Nurvero

Combien d'os en tout ?

**

+3

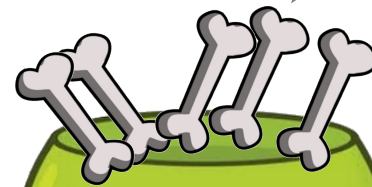


Nurvero

Combien d'os en tout ?

**

+3



Nurvero

?

4

3



Nurvero

?

5

3

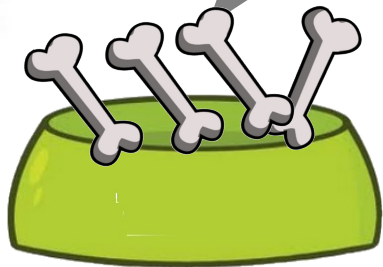


Nurvero

Combien d'os en tout ?

**

+4

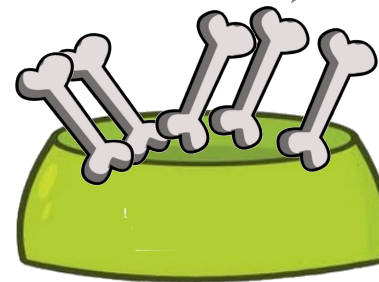


Nurvero

Combien d'os en tout ?

**

+4



Nurvero

?

4

4



Nurvero

?

5

4

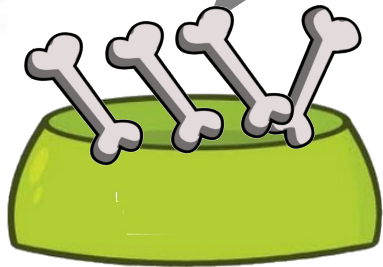


Nurvero

Combien d'os en tout ?

**

+5

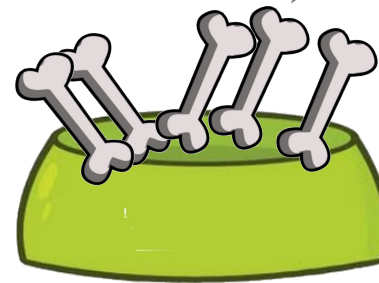


Nurvero

Combien d'os en tout ?

**

+5



Nurvero

?

4

5



Nurvero

?

5

5



Nurvero


9



10



10



10



10

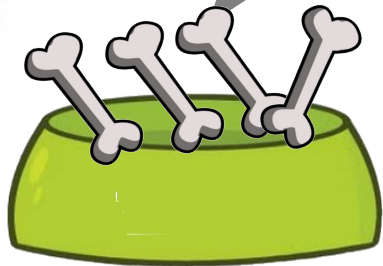


10

Combien d'os en tout ?

**

+6

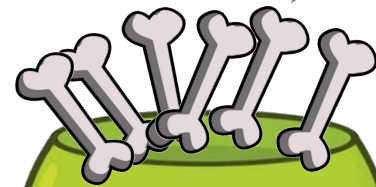


Nurvero

Combien d'os en tout ?

**

+4



Nurvero

?

4

6



Nurvero

?

6

4



Nurvero

Combien d'os en tout ?

**

+8



Nurvero

Combien d'os en tout ?

**

+9



Nurvero

?

2

8



Nurvero

?

1

9

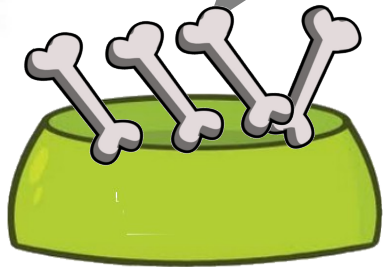


Nurvero

Combien d'os en tout ?

**

+5

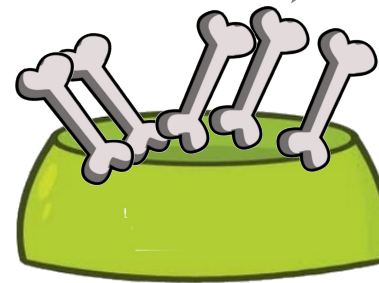


Nurvero

Combien d'os en tout ?

**

+5



Nurvero

?

4

5



Nurvero

?

5

5



Nurvero