

1. Calcul mental :

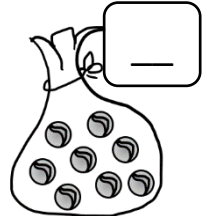
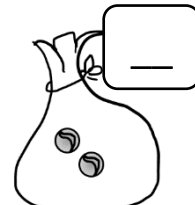



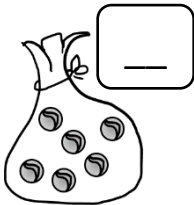
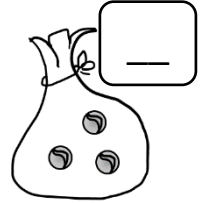
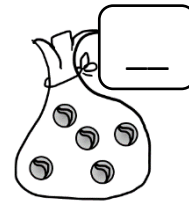
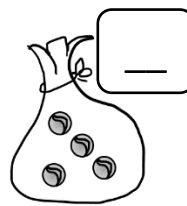
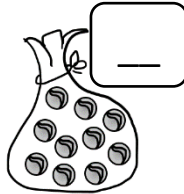
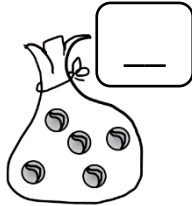

Je rajoute (+1) ou j'enlève 1 (-1)

2. Connaître des répertoires additifs

Compte puis



colorie de la même couleur les sachets qui mis ensemble ont 10 billes.


3. S'approprier les décompositions additives du nombre 10.

Trouve 2 familles du nombre 10.




Trace une ligne pour montrer les deux parties

dans chaque dessin puis complète l'addition.



__ et __ font 10

__ + __ = 10



__ et __ font 10

__ + __ = 10

4. Problèmes

Moustache a trouvé 3 os.

Combien doit-il encore en trouver pour en avoir 10 ?

→ Moustache doit trouver __ os.

