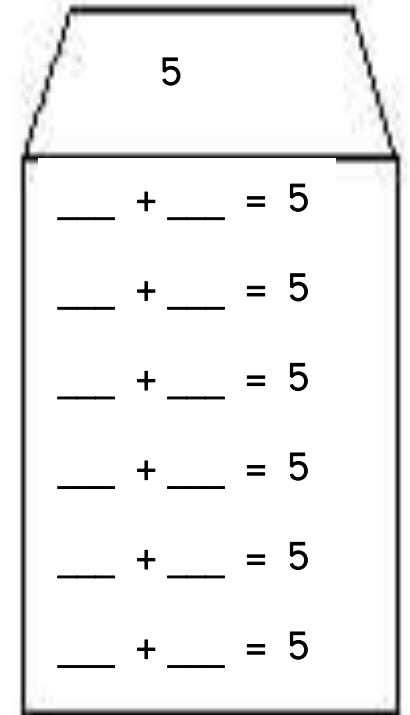
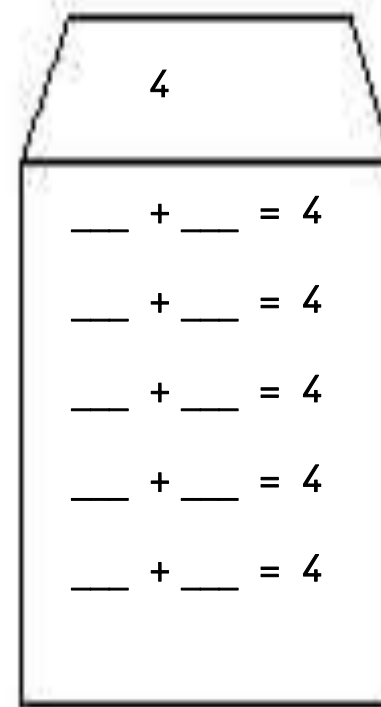
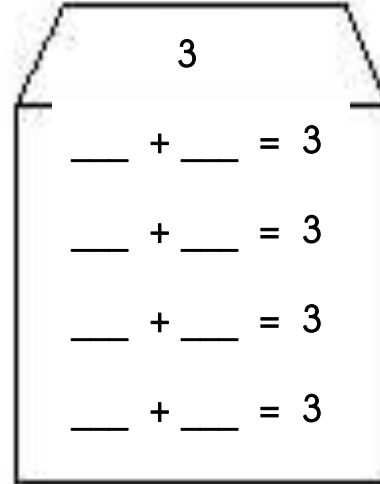
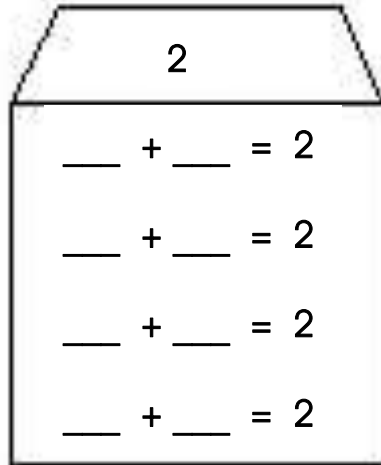
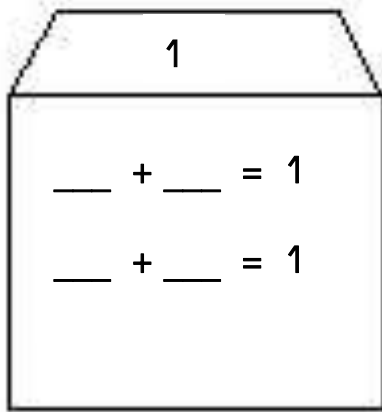


## Les maisons des nombres de 1 à 5



## Les maisons des nombres de 6 à 10

6

$$\_ + \_ = 6$$

$$\_ + \_ = 6$$

$$\_ + \_ = 6$$

$$\_ + \_ = 6$$

$$\_ + \_ = 6$$

$$\_ + \_ = 6$$

$$\_ + \_ = 6$$

7

$$\_ + \_ = 7$$

$$\_ + \_ = 7$$

$$\_ + \_ = 7$$

$$\_ + \_ = 7$$

$$\_ + \_ = 7$$

$$\_ + \_ = 7$$

$$\_ + \_ = 7$$

$$\_ + \_ = 7$$

8

$$\_ + \_ = 8$$

$$\_ + \_ = 8$$

$$\_ + \_ = 8$$

$$\_ + \_ = 8$$

$$\_ + \_ = 8$$

$$\_ + \_ = 8$$

$$\_ + \_ = 8$$

$$\_ + \_ = 8$$

$$\_ + \_ = 8$$

$$\_ + \_ = 8$$

9

$$\_ + \_ = 9$$

$$\_ + \_ = 9$$

$$\_ + \_ = 9$$

$$\_ + \_ = 9$$

$$\_ + \_ = 9$$

$$\_ + \_ = 9$$

$$\_ + \_ = 9$$

$$\_ + \_ = 9$$

$$\_ + \_ = 9$$

$$\_ + \_ = 9$$

10

$$\_ + \_ = 10$$

$$\_ + \_ = 10$$

$$\_ + \_ = 10$$

$$\_ + \_ = 10$$

$$\_ + \_ = 10$$

$$\_ + \_ = 10$$

$$\_ + \_ = 10$$

$$\_ + \_ = 10$$

$$\_ + \_ = 10$$

$$\_ + \_ = 10$$

$$\_ + \_ = 10$$