
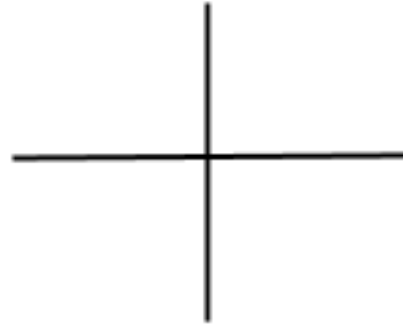


# RECONNAÎTRE LES DROITES PERPENDICULAIRES



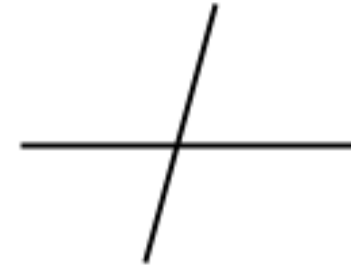
N°1



N°2




N°3



N°4



N°5



N°1



N°2



N°3



N°4



N°5

