

# EVALUATION MATHÉMATIQUES

## PÉRIODE 1

### Calcul

Prénom : .....




Compétences : Calculer mentalement des additions

A

ECA

NA

Ecris le résultat de ce que dit la maîtresse dans chaque nuage



Compétences : Calculer en ligne des additions

A

ECA

NA

**Calcule :**

$2 + 3 = \dots\dots\dots$

$1 + 2 = \dots\dots\dots$

$0 + 0 + 2 = \dots\dots\dots$

$1 + 4 = \dots\dots\dots$

$3 + 0 = \dots\dots\dots$

$1 + 2 + 1 = \dots\dots\dots$

$2 + 0 + 1 = \dots\dots\dots$

$4 + 0 + 1 = \dots\dots\dots$

$2 + 1 + 2 = \dots\dots\dots$

$0 + 1 + 3 = \dots\dots\dots$

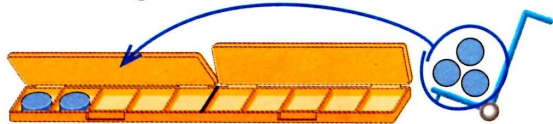
Compétences : Savoir écrire une égalité dans une situation de réunion

A

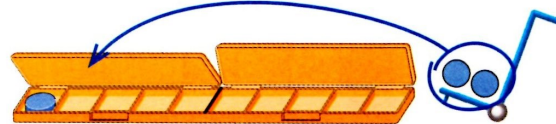
ECA

NA

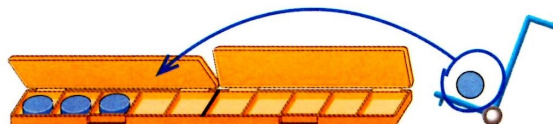
Écris les égalités.



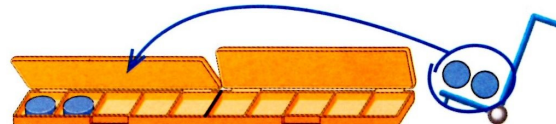
.....



.....



.....



.....

Compétences : Connaître la décomposition additive d'un nombre inférieur à 5

A

ECA

NA

**Complète :**

$$\begin{array}{c} 4 \\ \wedge \\ 3 + \dots \end{array}$$

$$\begin{array}{c} 3 \\ \wedge \\ 3 + \dots \end{array}$$

$$\begin{array}{c} 5 \\ \wedge \\ 1 + \dots \end{array}$$

$$\begin{array}{c} 3 \\ \wedge \\ 2 + \dots \end{array}$$

$$\begin{array}{c} 5 \\ \wedge \\ 2 + \dots \end{array}$$

$$\begin{array}{c} 4 \\ \wedge \\ 2 + \dots \end{array}$$

# EVALUATION MATHÉMATIQUES

## PÉRIODE 1

### Calcul

Prénom : .....






Compétences : Calculer mentalement des additions

A

ECA

NA

Ecris le résultat de ce que dit la maîtresse dans chaque nuage



Compétences : Calculer en ligne des additions

A

ECA

NA

**Calcule :**

$4 + 1 = \dots\dots\dots$

$2 + 1 = \dots\dots\dots$

$1 + 3 + 0 = \dots\dots\dots$

$3 + 2 = \dots\dots\dots$

$0 + 3 = \dots\dots\dots$

$1 + 4 + 0 = \dots\dots\dots$

$2 + 2 + 1 = \dots\dots\dots$

$1 + 1 + 2 = \dots\dots\dots$

$0 + 1 + 2 = \dots\dots\dots$

$2 + 0 + 0 = \dots\dots\dots$

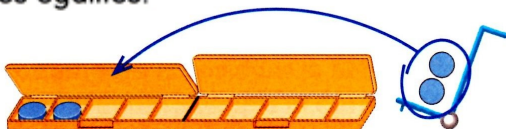
Compétences : Savoir écrire une égalité dans une situation de réunion

A

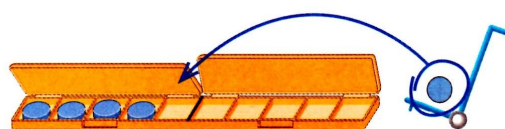
ECA

NA

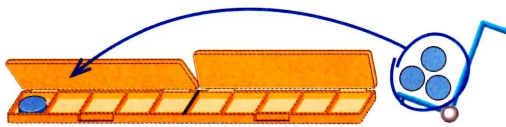
Écris les égalités.



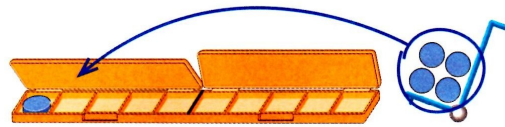
.....



.....



.....



.....

Compétences : Connaître la décomposition additive d'un nombre inférieur à 5

A

ECA

NA

**Complète :**

$$\begin{array}{c} 5 \\ \diagdown \quad \diagup \\ 1 + \dots \end{array}$$

$$\begin{array}{c} 3 \\ \diagdown \quad \diagup \\ 1 + \dots \end{array}$$

$$\begin{array}{c} 4 \\ \diagdown \quad \diagup \\ 2 + \dots \end{array}$$

$$\begin{array}{c} 3 \\ \diagdown \quad \diagup \\ 3 + \dots \end{array}$$

$$\begin{array}{c} 5 \\ \diagdown \quad \diagup \\ 2 + \dots \end{array}$$

$$\begin{array}{c} 4 \\ \diagdown \quad \diagup \\ 3 + \dots \end{array}$$





Compétences: Calculer mentalement des soustractions

A

ECA

NA

Ecris le résultat de ce que dit la maîtresse dans chaque nuage



Compétences: Calculer en ligne des soustractions

A

ECA

NA

**Calcule:**

$4 - 2 = \dots\dots\dots$

$4 - 3 = \dots\dots\dots$

$5 - 0 = \dots\dots\dots$

$5 - 3 = \dots\dots\dots$

$3 - 2 = \dots\dots\dots$

$4 - 1 = \dots\dots\dots$

Signature des parents





Compétences: Calculer mentalement des soustractions

A

ECA

NA

Ecris le résultat de ce que dit la maîtresse dans chaque nuage



Compétences: Calculer en ligne des soustractions

A

ECA

NA

**Calcule:**

$4 - 1 = \dots\dots\dots$

$5 - 3 = \dots\dots\dots$

$3 - 2 = \dots\dots\dots$

$5 - 0 = \dots\dots\dots$

$4 - 3 = \dots\dots\dots$

$4 - 2 = \dots\dots\dots$

Signature des parents