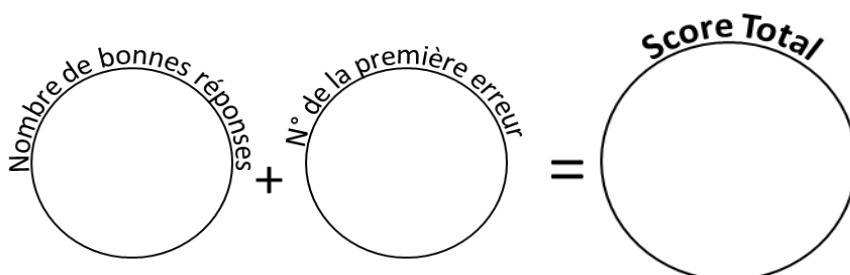


49 calculs en 5 minutes
(série 237)
Ceinture orange

Réponses
Ceinture orange
série 237

1	$392 \times 10 =$ _____	26	$186 - 10 =$ _____	3920	176
2	$30 + 80 =$ _____	27	$783 + 100 =$ _____	110	883
3	$190 - 50 =$ _____	28	$244 - 100 =$ _____	140	144
4	$223 + 10 =$ _____	29	$430 \times 100 =$ _____	233	43000
5	$164 - 10 =$ _____	30	$190 + 100 =$ _____	154	290
6	$301 + 100 =$ _____	31	$150 - 60 =$ _____	401	90
7	$642 - 100 =$ _____	32	$220 + 10 =$ _____	542	230
8	$715 \times 100 =$ _____	33	$231 - 10 =$ _____	71500	221
9	$110 + 20 =$ _____	34	$473 + 100 =$ _____	130	573
10	$170 - 40 =$ _____	35	$114 - 100 =$ _____	130	14
11	$193 + 10 =$ _____	36	$702 \times 100 =$ _____	203	70200
12	$165 - 10 =$ _____	37	$140 + 70 =$ _____	155	210
13	$512 + 100 =$ _____	38	$160 - 90 =$ _____	612	70
14	$448 - 100 =$ _____	39	$91 + 10 =$ _____	348	101
15	$543 \times 1000 =$ _____	40	$159 - 10 =$ _____	543000	149
16	$120 + 70 =$ _____	41	$397 + 100 =$ _____	190	497
17	$170 - 20 =$ _____	42	$203 - 100 =$ _____	150	103
18	$190 + 10 =$ _____	43	$954 \times 100 =$ _____	200	95400
19	$127 - 10 =$ _____	44	$100 + 120 =$ _____	117	220
20	$75 + 100 =$ _____	45	$140 - 20 =$ _____	175	120
21	$929 - 100 =$ _____	46	$171 + 10 =$ _____	829	181
22	$424 \times 10 =$ _____	47	$100 - 10 =$ _____	4240	90
23	$90 + 50 =$ _____	48	$852 + 100 =$ _____	140	952
24	$170 - 40 =$ _____	49	$138 - 100 =$ _____	130	38
25	$173 + 10 =$ _____			183	

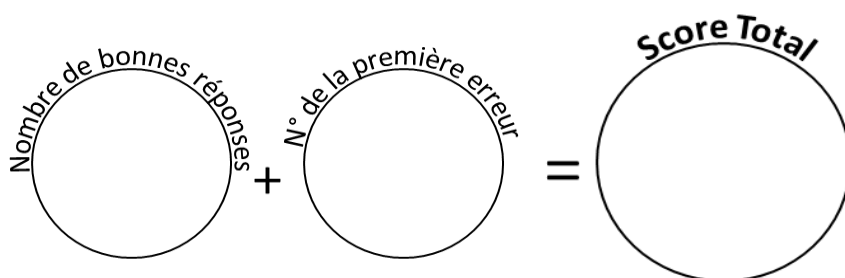


Reporte ton score sur ton graphique !

49 calculs en 5 minutes
(série 244)
Ceinture orange

Réponses
Ceinture orange
série 244

1	$513 \times 10 =$ _____	26	$41 - 10 =$ _____	5130	31
2	$90 + 10 =$ _____	27	$416 + 100 =$ _____	100	516
3	$180 - 110 =$ _____	28	$635 - 100 =$ _____	70	535
4	$151 + 10 =$ _____	29	$326 \times 100 =$ _____	161	32600
5	$176 - 10 =$ _____	30	$160 + 70 =$ _____	166	230
6	$139 + 100 =$ _____	31	$160 - 110 =$ _____	239	50
7	$219 - 100 =$ _____	32	$114 + 10 =$ _____	119	124
8	$458 \times 100 =$ _____	33	$131 - 10 =$ _____	45800	121
9	$40 + 10 =$ _____	34	$221 + 100 =$ _____	50	321
10	$160 - 120 =$ _____	35	$996 - 100 =$ _____	40	896
11	$73 + 10 =$ _____	36	$428 \times 100 =$ _____	83	42800
12	$136 - 10 =$ _____	37	$80 + 70 =$ _____	126	150
13	$760 + 100 =$ _____	38	$150 - 90 =$ _____	860	60
14	$926 - 100 =$ _____	39	$45 + 10 =$ _____	826	55
15	$627 \times 1000 =$ _____	40	$58 - 10 =$ _____	627000	48
16	$20 + 40 =$ _____	41	$85 + 100 =$ _____	60	185
17	$140 - 30 =$ _____	42	$591 - 100 =$ _____	110	491
18	$169 + 10 =$ _____	43	$534 \times 100 =$ _____	179	53400
19	$110 - 10 =$ _____	44	$90 + 50 =$ _____	100	140
20	$381 + 100 =$ _____	45	$150 - 20 =$ _____	481	130
21	$396 - 100 =$ _____	46	$92 + 10 =$ _____	296	102
22	$907 \times 10 =$ _____	47	$133 - 10 =$ _____	9070	123
23	$80 + 70 =$ _____	48	$477 + 100 =$ _____	150	577
24	$150 - 80 =$ _____	49	$808 - 100 =$ _____	70	708
25	$201 + 10 =$ _____			211	

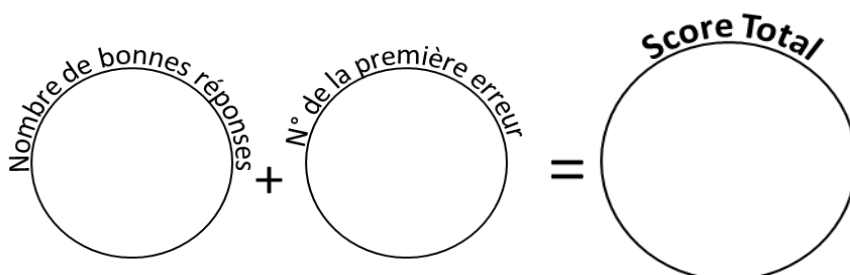


Reporte ton score sur ton graphique !

49 calculs en 5 minutes
(série 846)
Ceinture orange

Réponses
Ceinture orange
série 846

1	$358 \times 10 =$ _____	26	$176 - 10 =$ _____	3580	166
2	$10 + 100 =$ _____	27	$59 + 100 =$ _____	110	159
3	$180 - 100 =$ _____	28	$541 - 100 =$ _____	80	441
4	$214 + 10 =$ _____	29	$585 \times 100 =$ _____	224	58500
5	$85 - 10 =$ _____	30	$180 + 40 =$ _____	75	220
6	$110 + 100 =$ _____	31	$180 - 100 =$ _____	210	80
7	$602 - 100 =$ _____	32	$229 + 10 =$ _____	502	239
8	$53 \times 100 =$ _____	33	$140 - 10 =$ _____	5300	130
9	$150 + 100 =$ _____	34	$825 + 100 =$ _____	250	925
10	$150 - 70 =$ _____	35	$40 - 100 =$ _____	80	-60
11	$160 + 10 =$ _____	36	$430 \times 100 =$ _____	170	43000
12	$69 - 10 =$ _____	37	$110 + 50 =$ _____	59	160
13	$147 + 100 =$ _____	38	$150 - 40 =$ _____	247	110
14	$586 - 100 =$ _____	39	$56 + 10 =$ _____	486	66
15	$73 \times 1000 =$ _____	40	$54 - 10 =$ _____	73000	44
16	$160 + 70 =$ _____	41	$659 + 100 =$ _____	230	759
17	$140 - 50 =$ _____	42	$311 - 100 =$ _____	90	211
18	$189 + 10 =$ _____	43	$847 \times 100 =$ _____	199	84700
19	$230 - 10 =$ _____	44	$10 + 40 =$ _____	220	50
20	$77 + 100 =$ _____	45	$170 - 50 =$ _____	177	120
21	$378 - 100 =$ _____	46	$170 + 10 =$ _____	278	180
22	$421 \times 10 =$ _____	47	$159 - 10 =$ _____	4210	149
23	$80 + 80 =$ _____	48	$862 + 100 =$ _____	160	962
24	$180 - 40 =$ _____	49	$725 - 100 =$ _____	140	625
25	$43 + 10 =$ _____			53	

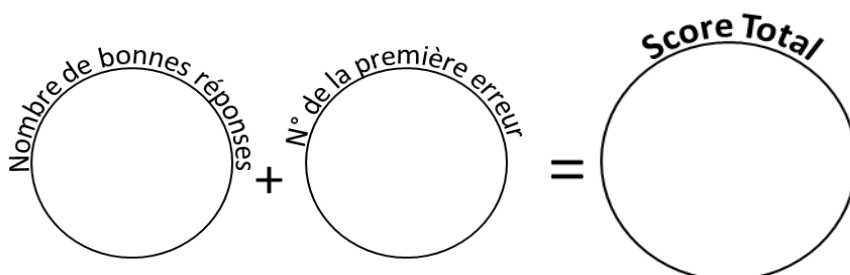


Reporte ton score sur ton graphique !

49 calculs en 5 minutes
(série 705)
Ceinture orange

Réponses
Ceinture orange
série 705

1	$453 \times 10 =$ _____	26	$80 - 10 =$ _____	4530	70
2	$180 + 50 =$ _____	27	$407 + 100 =$ _____	230	507
3	$130 - 10 =$ _____	28	$263 - 100 =$ _____	120	163
4	$181 + 10 =$ _____	29	$556 \times 100 =$ _____	191	55600
5	$46 - 10 =$ _____	30	$90 + 110 =$ _____	36	200
6	$631 + 100 =$ _____	31	$170 - 120 =$ _____	731	50
7	$723 - 100 =$ _____	32	$173 + 10 =$ _____	623	183
8	$280 \times 100 =$ _____	33	$143 - 10 =$ _____	28000	133
9	$20 + 50 =$ _____	34	$636 + 100 =$ _____	70	736
10	$180 - 120 =$ _____	35	$224 - 100 =$ _____	60	124
11	$75 + 10 =$ _____	36	$18 \times 100 =$ _____	85	1800
12	$230 - 10 =$ _____	37	$120 + 120 =$ _____	220	240
13	$353 + 100 =$ _____	38	$160 - 100 =$ _____	453	60
14	$467 - 100 =$ _____	39	$159 + 10 =$ _____	367	169
15	$673 \times 1000 =$ _____	40	$230 - 10 =$ _____	673000	220
16	$120 + 40 =$ _____	41	$302 + 100 =$ _____	160	402
17	$130 - 50 =$ _____	42	$467 - 100 =$ _____	80	367
18	$71 + 10 =$ _____	43	$405 \times 100 =$ _____	81	40500
19	$176 - 10 =$ _____	44	$60 + 90 =$ _____	166	150
20	$53 + 100 =$ _____	45	$180 - 50 =$ _____	153	130
21	$303 - 100 =$ _____	46	$195 + 10 =$ _____	203	205
22	$953 \times 10 =$ _____	47	$129 - 10 =$ _____	9530	119
23	$190 + 30 =$ _____	48	$364 + 100 =$ _____	220	464
24	$140 - 100 =$ _____	49	$645 - 100 =$ _____	40	545
25	$94 + 10 =$ _____			104	

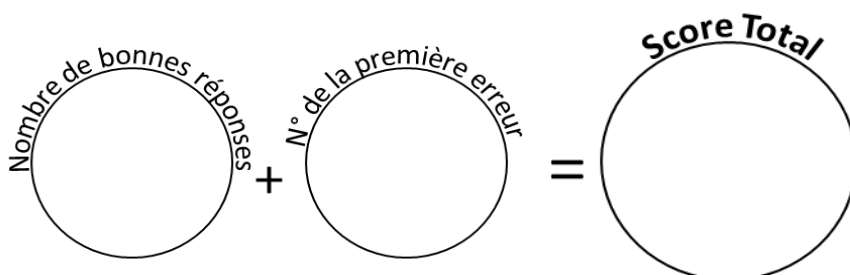


Reporte ton score sur ton graphique !

49 calculs en 5 minutes
(série 462)
Ceinture orange

Réponses
Ceinture orange
série 462

1	$606 \times 10 =$ _____	26	$60 - 10 =$ _____	6060	50
2	$140 + 90 =$ _____	27	$314 + 100 =$ _____	230	414
3	$140 - 90 =$ _____	28	$610 - 100 =$ _____	50	510
4	$118 + 10 =$ _____	29	$689 \times 100 =$ _____	128	68900
5	$223 - 10 =$ _____	30	$120 + 10 =$ _____	213	130
6	$114 + 100 =$ _____	31	$180 - 60 =$ _____	214	120
7	$716 - 100 =$ _____	32	$118 + 10 =$ _____	616	128
8	$354 \times 100 =$ _____	33	$171 - 10 =$ _____	35400	161
9	$170 + 60 =$ _____	34	$637 + 100 =$ _____	230	737
10	$190 - 50 =$ _____	35	$884 - 100 =$ _____	140	784
11	$40 + 10 =$ _____	36	$178 \times 100 =$ _____	50	17800
12	$198 - 10 =$ _____	37	$90 + 80 =$ _____	188	170
13	$973 + 100 =$ _____	38	$160 - 80 =$ _____	1073	80
14	$599 - 100 =$ _____	39	$162 + 10 =$ _____	499	172
15	$50 \times 1000 =$ _____	40	$226 - 10 =$ _____	50000	216
16	$70 + 110 =$ _____	41	$883 + 100 =$ _____	180	983
17	$190 - 100 =$ _____	42	$711 - 100 =$ _____	90	611
18	$47 + 10 =$ _____	43	$776 \times 100 =$ _____	57	77600
19	$228 - 10 =$ _____	44	$10 + 120 =$ _____	218	130
20	$648 + 100 =$ _____	45	$180 - 10 =$ _____	748	170
21	$380 - 100 =$ _____	46	$36 + 10 =$ _____	280	46
22	$859 \times 10 =$ _____	47	$164 - 10 =$ _____	8590	154
23	$130 + 90 =$ _____	48	$738 + 100 =$ _____	220	838
24	$150 - 40 =$ _____	49	$198 - 100 =$ _____	110	98
25	$167 + 10 =$ _____			177	

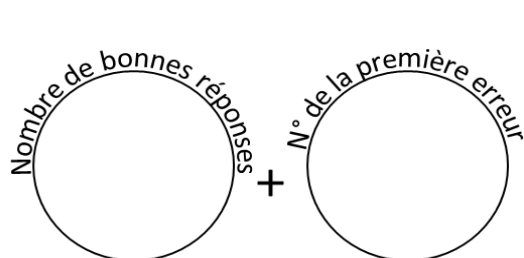


Reporte ton score sur ton graphique !

49 calculs en 5 minutes
(série 648)
Ceinture orange

Réponses
Ceinture orange
série 648

1	$503 \times 10 =$ _____	26	$73 - 10 =$ _____	5030	63
2	$120 + 40 =$ _____	27	$194 + 100 =$ _____	160	294
3	$170 - 50 =$ _____	28	$504 - 100 =$ _____	120	404
4	$143 + 10 =$ _____	29	$540 \times 100 =$ _____	153	54000
5	$170 - 10 =$ _____	30	$70 + 70 =$ _____	160	140
6	$316 + 100 =$ _____	31	$170 - 30 =$ _____	416	140
7	$206 - 100 =$ _____	32	$55 + 10 =$ _____	106	65
8	$230 \times 100 =$ _____	33	$69 - 10 =$ _____	23000	59
9	$110 + 50 =$ _____	34	$470 + 100 =$ _____	160	570
10	$130 - 10 =$ _____	35	$271 - 100 =$ _____	120	171
11	$174 + 10 =$ _____	36	$70 \times 100 =$ _____	184	7000
12	$48 - 10 =$ _____	37	$90 + 80 =$ _____	38	170
13	$800 + 100 =$ _____	38	$160 - 10 =$ _____	900	150
14	$821 - 100 =$ _____	39	$161 + 10 =$ _____	721	171
15	$573 \times 1000 =$ _____	40	$50 - 10 =$ _____	573000	40
16	$80 + 40 =$ _____	41	$965 + 100 =$ _____	120	1065
17	$190 - 30 =$ _____	42	$72 - 100 =$ _____	160	-28
18	$52 + 10 =$ _____	43	$460 \times 100 =$ _____	62	46000
19	$43 - 10 =$ _____	44	$160 + 110 =$ _____	33	270
20	$62 + 100 =$ _____	45	$170 - 10 =$ _____	162	160
21	$33 - 100 =$ _____	46	$57 + 10 =$ _____	-67	67
22	$425 \times 10 =$ _____	47	$200 - 10 =$ _____	4250	190
23	$100 + 20 =$ _____	48	$998 + 100 =$ _____	120	1098
24	$180 - 20 =$ _____	49	$424 - 100 =$ _____	160	324
25	$185 + 10 =$ _____			195	



Reporte ton
score sur ton
graphique !