



Nom :

Date :

Prénom :



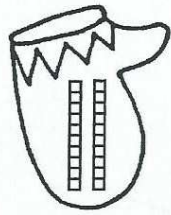
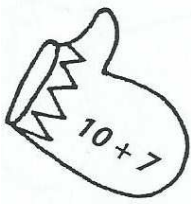
Les nombres de 0 à 20

0	zéro	10	dix	20	vingt
1	un	11	onze		
2	deux	12	douze		
3	trois	13	treize		
4	quatre	14	quatorze		
5	cinq	15	quinze		
6	six	16	seize		
7	sept	17	dix-sept		
8	huit	18	dix-huit		
9	neuf	19	dix-neuf		

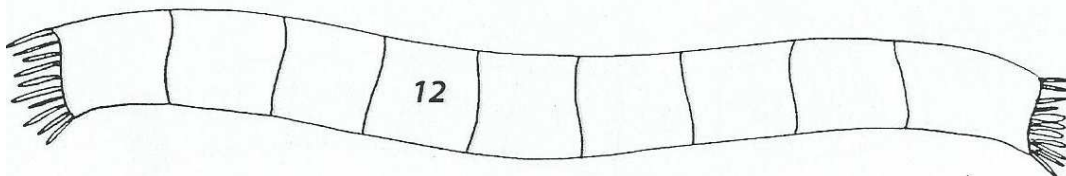
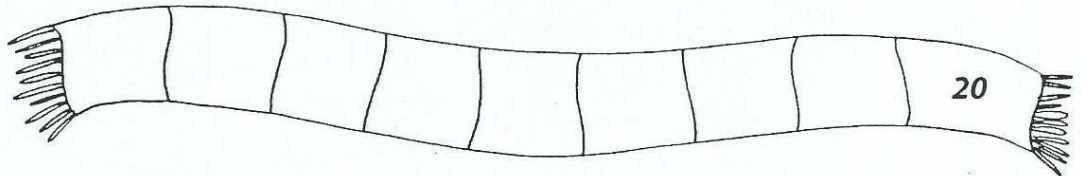
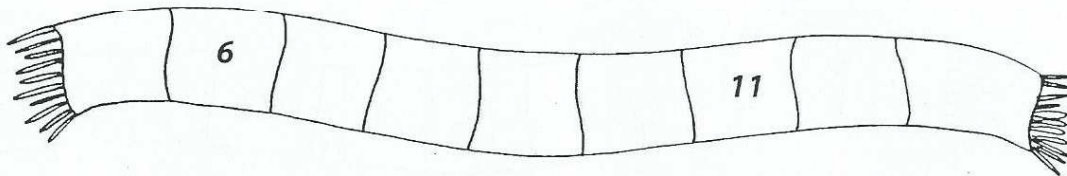
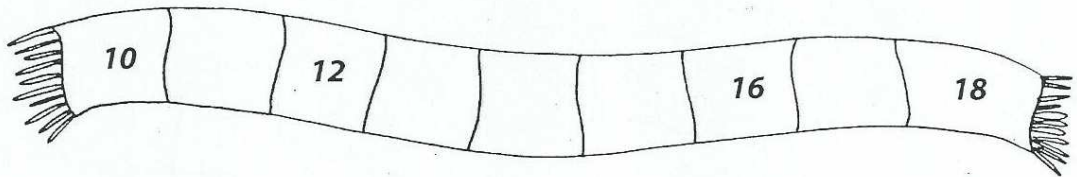
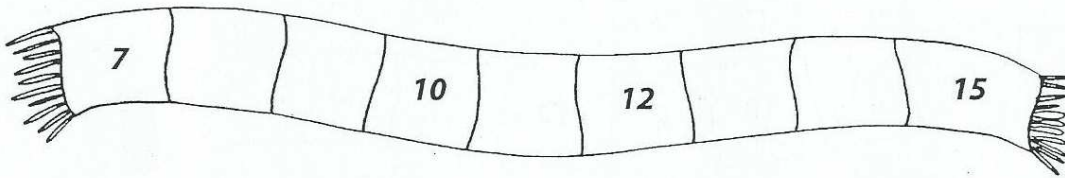
Relie les nombres dans l'ordre croissant à l'aide d'une règle.



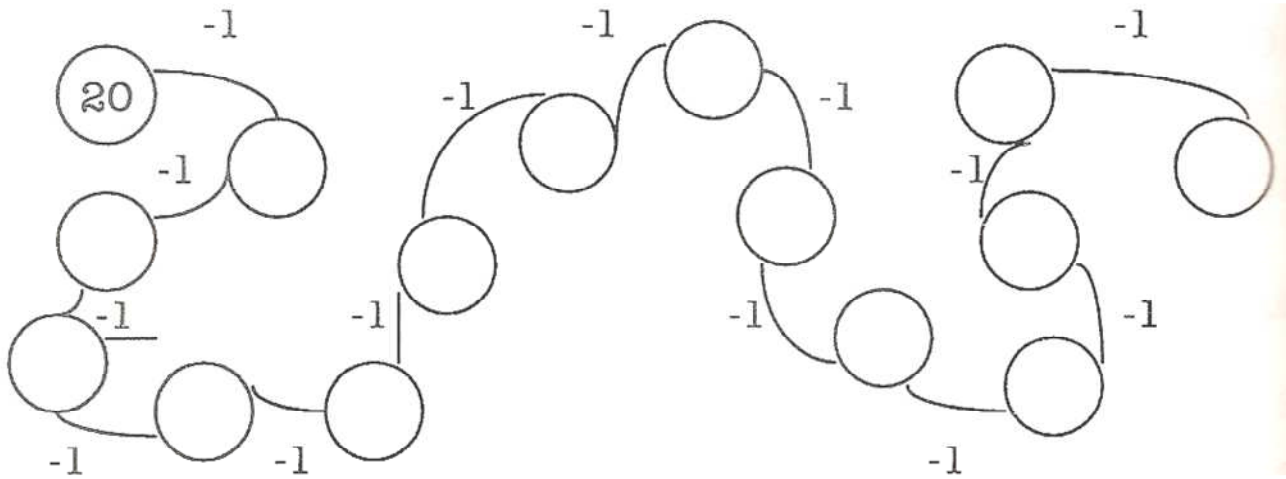
Retrouve les paires qui ont la même valeur. Colorie-les.



Complète les écharpes.



Compte en descendant.



Ordonne les nombres.

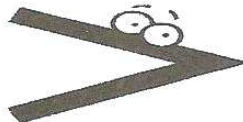
Ordonne les nombres du plus petit au plus grand (par ordre croissant) ou du plus grand au plus petit (par ordre décroissant).

6, 10, 3, 8



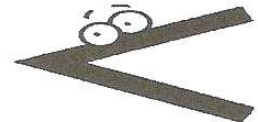
... < ... < ... < ...

9, 0, 3, 10




... > ... > ... > ...

7, 5, 6




... < ... < ...

4, 8, 3, 9, 0



... < ... < ... < ... < ...

10, 6, 9, 1




... > ... > ... > ...

2, 8, 4, 5



... < ... < ... < ...

Ordonne les nombres du plus petit au plus grand.



8, 5, 0, 9, 2

... < ... < ... < ... < ...

10, 5, 1, 6, 9

... < ... < ... < ... < ...

Ordonne les nombres du plus grand au plus petit.



8, 4, 7, 3, 6

... > ... > ... > ... > ...

1, 2, 3, 6, 5

... > ... > ... > ... > ...

- **Compte et complète l'étiquette.**

5 Compte et complète l'étiquette.

The first grid has 10 shaded blocks and 5 empty blocks. Below it is a box with three dots. The second grid has 10 shaded blocks and 5 empty blocks. Below it is a box with three dots. The third grid has 10 shaded blocks and 5 empty blocks. Below it is a box with three dots.

- **Colorie le nombre de blocs demandé .**

Colorie le nombre de blocs demandé.


The first grid has 13 boxes. Below it is a box with the number 13. The second grid has 17 boxes. Below it is a box with the number 17. The third grid has 20 boxes. Below it is a box with the number 20.

- **Colorie le bon nombre de cases.**

Colorie le bon nombre de cases.



There are five ten-frame grids. Below them are five circles containing numbers: 17, 12, 16, 11, and 20. Arrows point from the circles to the grids: 17 points to the first grid, 12 points to the second grid, 16 points to the third grid, 11 points to the fourth grid, and 20 points to the fifth grid.

Colorie en rouge le bonnet du 5^e skieur.
Colorie en bleu le bonnet du 10^e skieur.



Combien y a-t-il de skieurs ?

Continue de numéroté les drapeaux.



Complète : José a le siège n°.....
Audrey est juste derrière José,
sur le siège n°.....



Dessine l'écharpe de Marie sur
le siège où elle était.


Nom :

Date :

Prénom :

Devoir : les nombres de 0 à 20.

- Des nombres manquent sur certains cubes. Complète-les.



- Des comptages : complète.

Complète.

0 1 2 10 20

0 2 10 20

0 4 20

0 5 20