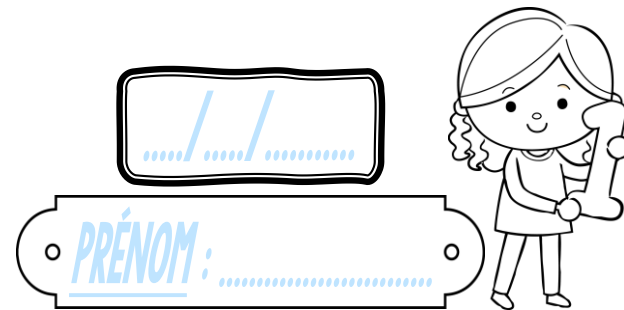
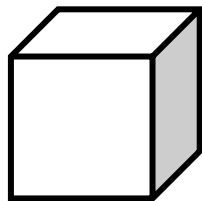


Geométrie

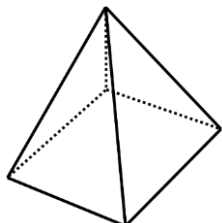
CMI



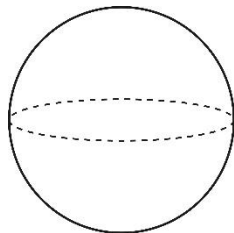
① Ces figures sont-elles des polyèdres ?



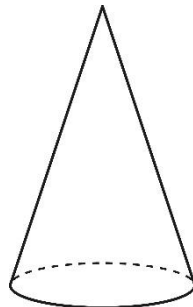
Oui Non



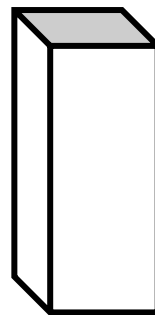
Oui Non




Oui Non



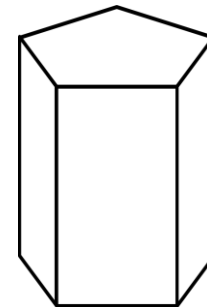
Oui Non



Oui Non

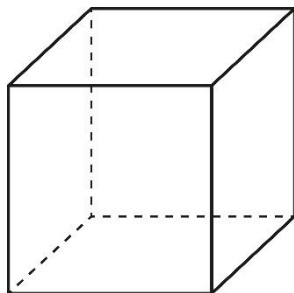
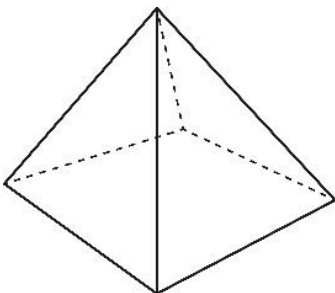


Oui Non



Oui Non

② Observe ces solides, puis réponds aux questions.

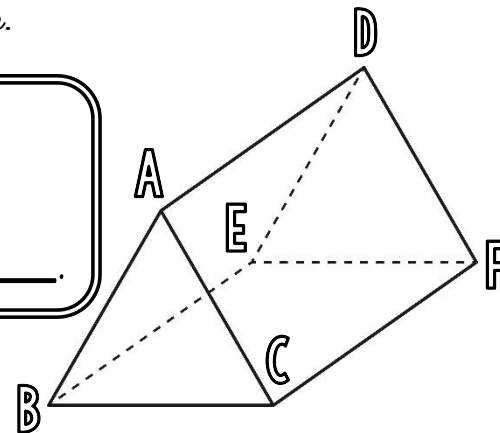


- Marque leurs sommets en vert.
- Repasse leurs arêtes en bleu.
- Colorie deux faces opposées en jaune.

③ a) Décalque cette figure.



Ce solide est un _____.



- Nomme ses 2 bases.
- Quelle forme ont les bases de ce solide ?
- Nomme les faces, les arêtes et les sommets de ce solide.