

Nom :

Date :

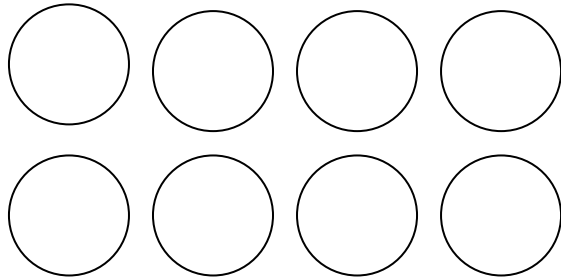
Prénom :

Les euros

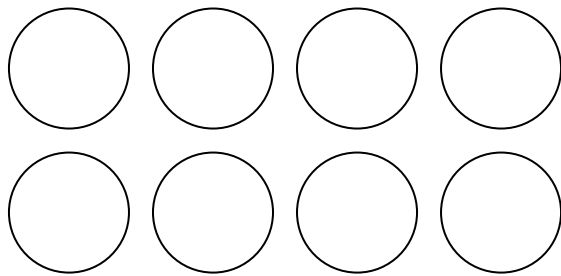
1. Dessine pour chaque article les pièces nécessaires pour le payer. Attention, il peut rester des pièces !



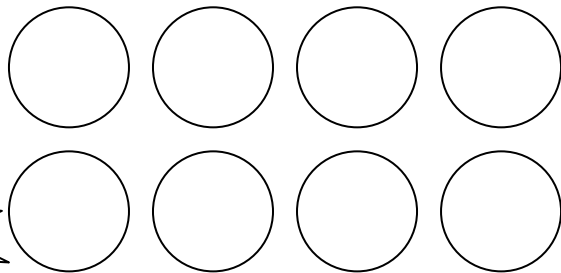
2 € 58 c



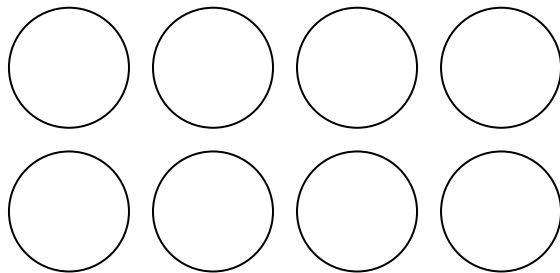
66 c



3€ 18 c



1€ 12 c




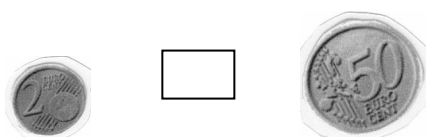
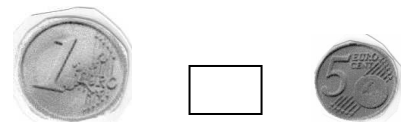
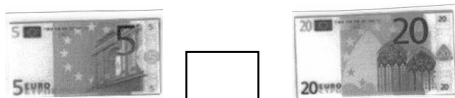

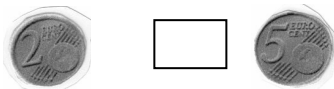



2. Recopie ces sommes d'argent de la plus petite à la plus grande.

0.02 € - 0,12 € - 15 € - 0.20 € - 0,50 €

3,50 € - 5,25 € - 0.50 € - 0.07 € - 2 €

3. Complète en respectant les signes >, = ou <.



4. Dessine les pièces et les billets pour payer cet article.

