

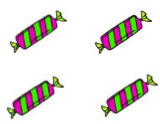
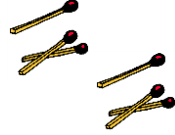
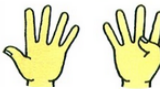





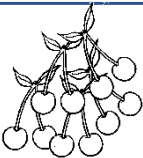


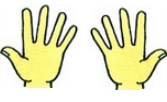
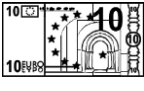





1. Calcul mental :  calcul mental.

__	__	__	__	__
----	----	----	----	----

















2. Différentes représentations du 10.

Bob, le crayon veut écrire.  **Colorie** les cases qui font 10 pour tracer son chemin.

						
			10			
						

3. Trouver les paires qui font 10 :

 **Colorie** deux balles par ligne pour faire 10.

4. Problème

Dans la ferme, il y a 3 cochons et 7 poules.

Combien y a-t-il d'animaux en tout ?

→ ____ + ____ = ____

→ Il y a ____ animaux en tout.

