

CE1

1 Écris les couleurs de 4 quilles alignées.



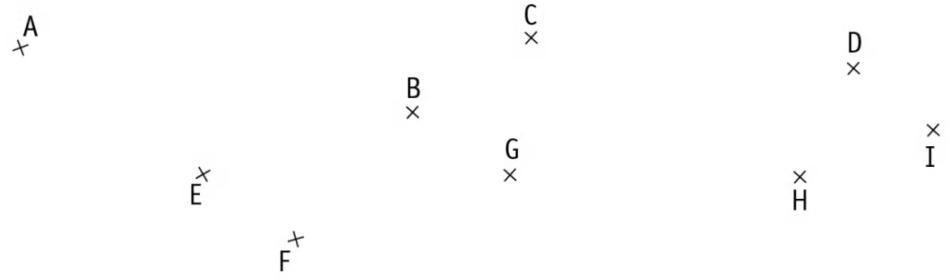
.....

.....

.....


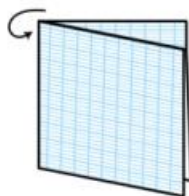
.....

2 Entoure en bleu trois points alignés puis trois autres en vert.

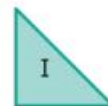
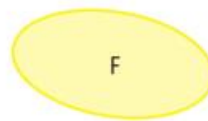
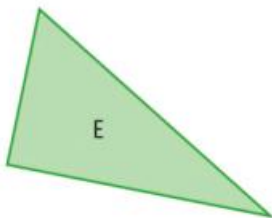
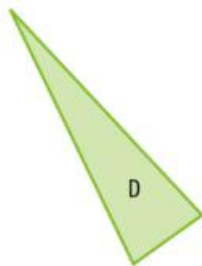
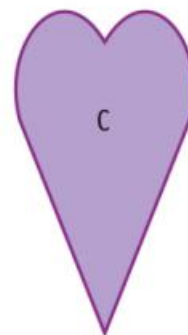




CE1

**3 a** Construis un gabarit d'angle droit. Plie une feuille de papier en 2.  
Puis encore en 2.




**b** Utilise ton gabarit pour trouver les angles droits dans ces figures. Note-les.



CE1

4 Recherche avec ton gabarit tous les angles droits et note-les.



5 Recherche avec ton gabarit au moins 6 angles droits et note-les.

