

Colorie les colonnes en rouge puis les unités en bleu. Combien y a - t - il dans chaque boîte?

d	u	→	

d	u	→	

d	u	→	

d	u	→	

d	u	→	

d	u	→	

d	u	→	

d	u	→	

d	u	→	

d	u	→	

d	u	→	

d	u	→	

d	u	→	

d	u	→	

d	u	→	

d	u	→	

d	u	→	

d	u	→	

Utilise un dé rouge et un dé bleu. Écris le nombre de dizaines et d'unités dans le tableau. Dessine la collection dans la boîte.

d	u

 →

d	u

 →

d	u

 →

d	u

 →

d	u

 →

d	u

 →

La Domrod Classe CP

d	u

 →

d	u

 →

d	u

 →

d	u

 →

d	u

 →

d	u

 →

La Domrod Classe CP

d	u

 →

d	u

 →

d	u

 →

d	u

 →

d	u

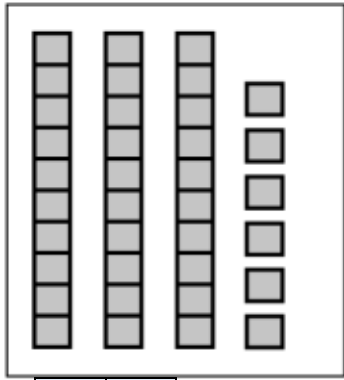
 →

d	u

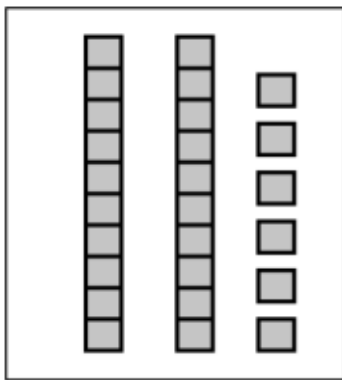
 →

La Domrod Classe CP


Colorie les dizaines en rouge puis les unités en bleu. Combien y a-t-il dans chaque boîte?



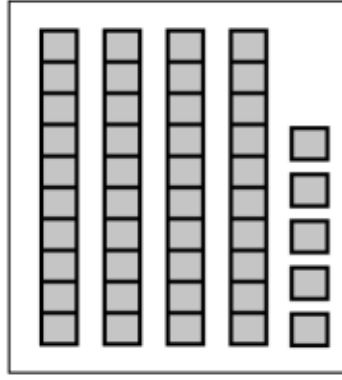
d	u	→	<input type="text"/>



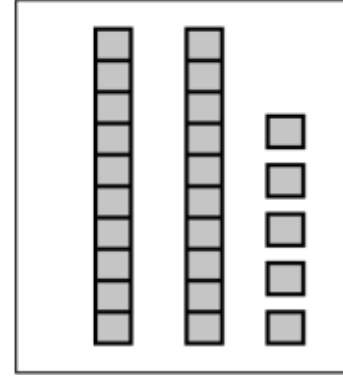
d	u	→	<input type="text"/>



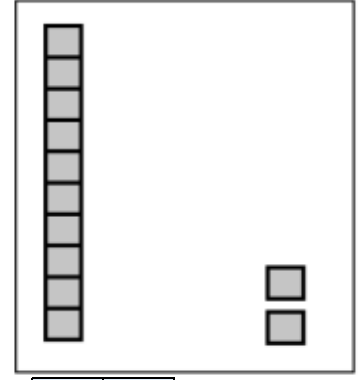
d	u	→	<input type="text"/>



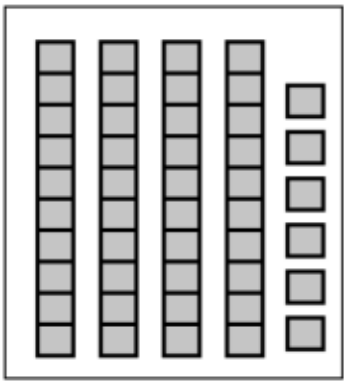
d	u	→	<input type="text"/>



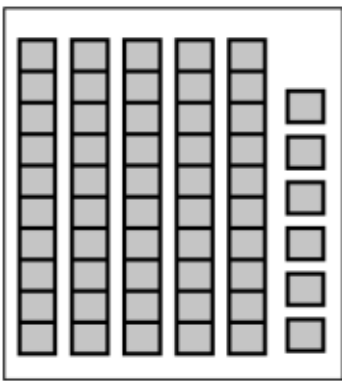
d	u	→	<input type="text"/>



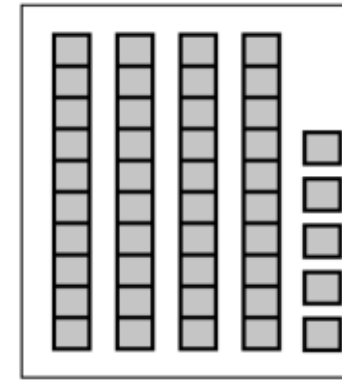
d	u	→	<input type="text"/>



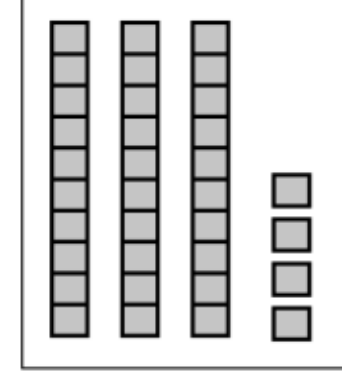
d	u	→	<input type="text"/>



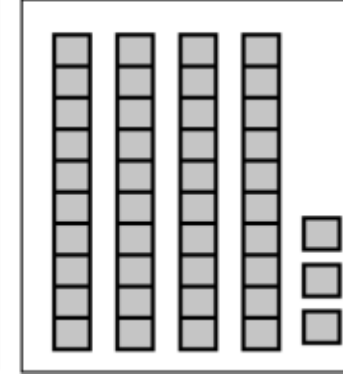
d	u	→	<input type="text"/>



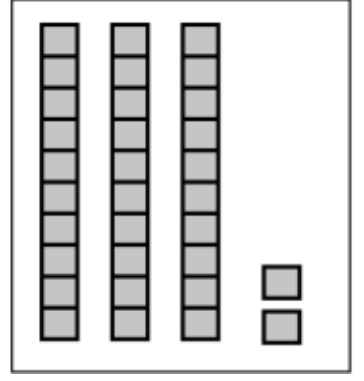
d	u	→	<input type="text"/>



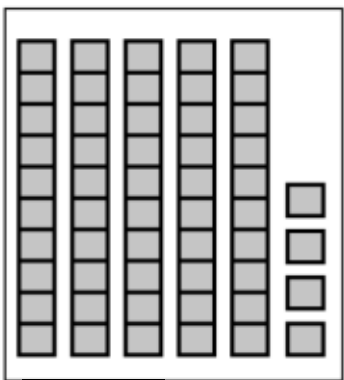
d	u	→	<input type="text"/>



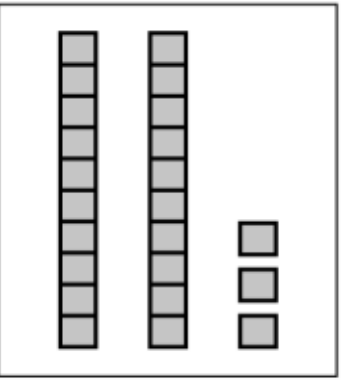
d	u	→	<input type="text"/>



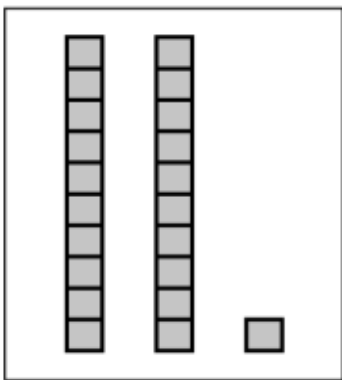
d	u	→	<input type="text"/>



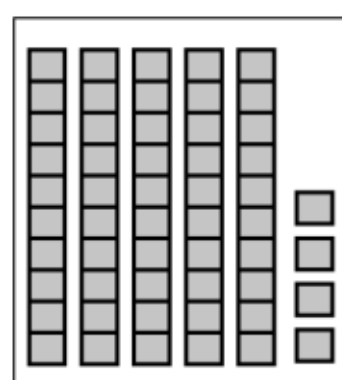
d	u	→	<input type="text"/>



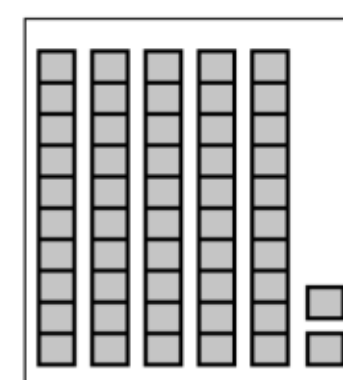
d	u	→	<input type="text"/>



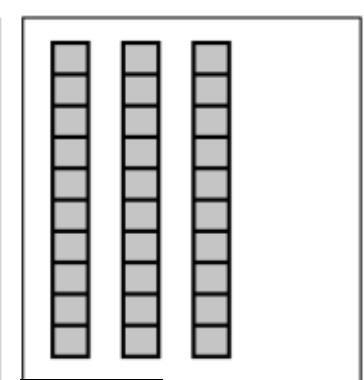
d	u	→	<input type="text"/>



d	u	→	<input type="text"/>



d	u	→	<input type="text"/>



d	u	→	<input type="text"/>