

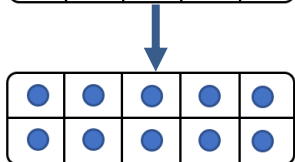
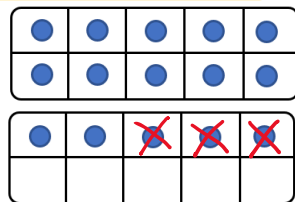

N 15

La soustraction

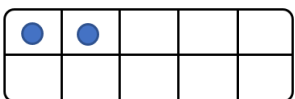


Soustraire un petit nombre : $15 - 3$

le signe « - » me dit
que je dois enlever
3 au 5 du 15

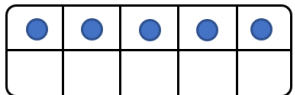



$$15 - 3 = 12$$

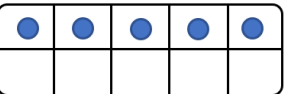
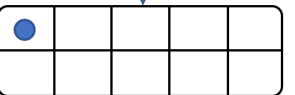


Soustraire un grand nombre : $15 - 9$

le signe « - » me dit
que je dois enlever
9 au 10 du 15



$$15 - 9 = 6$$



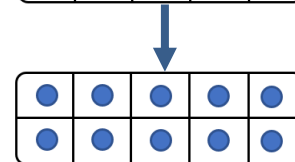
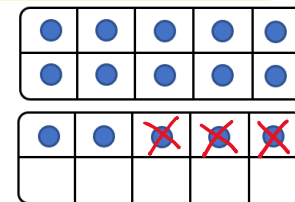

N 15

La soustraction

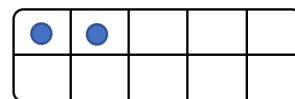


Soustraire un petit nombre : $15 - 3$

le signe « - » me dit
que je dois enlever
3 au 5 du 15

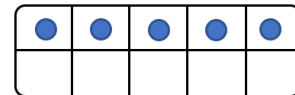



$$15 - 3 = 12$$



Soustraire un grand nombre : $15 - 9$

le signe « - » me dit
que je dois enlever
9 au 10 du 15



$$15 - 9 = 6$$

