



**Ecris la suite**

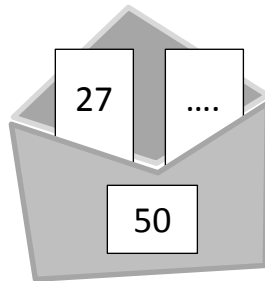
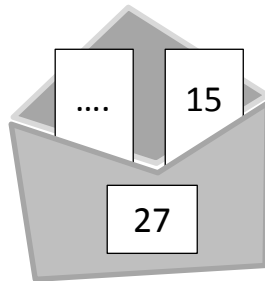
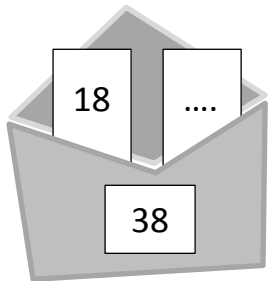
- En avançant de 2 en 2.

15 – 17 - ..... - ..... - ..... - ..... - ..... - ..... - ..... - ..... -

- En avançant de 5 en 5.

24 – 29 - ..... - ..... - ..... - ..... - ..... - ..... - ..... - ..... -

**Ecris le nombre de la deuxième carte pour obtenir le total indiqué sur l’enveloppe.**



**Complète**

$10 + \dots = 30$	$27 + \dots = 44$	$\dots + 16 = 32$
$40 + \dots = 47$	$\dots + 12 = 20$	$\dots + 24 = 41$
$21 + \dots = 38$	$\dots + 19 = 23$	$19 + \dots = 48$



**Ecris la suite**

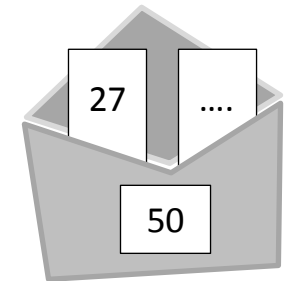
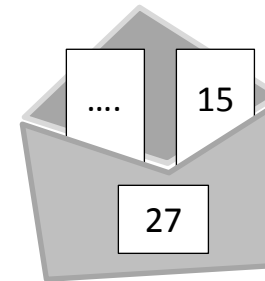
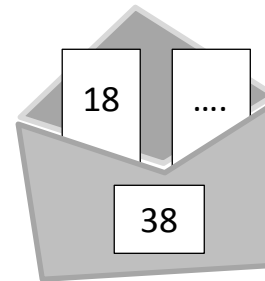
- En avançant de 2 en 2.

15 – 17 - ..... - ..... - ..... - ..... - ..... - ..... - ..... - ..... -

- En avançant de 5 en 5.

24 – 29 - ..... - ..... - ..... - ..... - ..... - ..... - ..... - ..... -

**Ecris le nombre de la deuxième carte pour obtenir le total indiqué sur l’enveloppe.**



**Complète**

$10 + \dots = 30$	$27 + \dots = 44$	$\dots + 16 = 32$
$40 + \dots = 47$	$\dots + 12 = 20$	$\dots + 24 = 41$
$21 + \dots = 38$	$\dots + 19 = 23$	$19 + \dots = 48$