



1 Relie chaque égalité au nombre sur la bande numérique



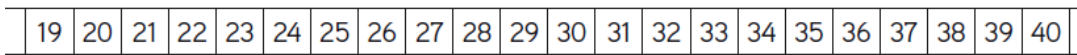
$10 + 10 + 10 + 6$



$20 + 1 + 1 + 1 + 1$



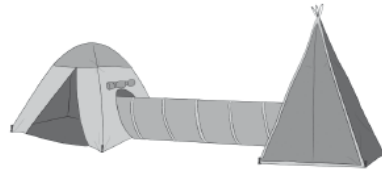
$10 + 20 + 9$



$10 + 10 + 1 + 1 + 1$

$10 + 10 + 10 + 1$

$30 + 7$



2 Ecris en chiffres

2 dizaines 4 unités =

$20 + 4 = \dots\dots\dots$

3 dizaines =

$30 + 7 = \dots\dots\dots$

2 dizaines 8 unités =

$40 + 1 = \dots\dots\dots$

4 dizaines 7 unités =

$10 + 10 + 9 = \dots\dots\dots$

3 dizaines 3 unités =

$20 + 10 + 7 = \dots\dots\dots$




4 dizaines 9 unités =

$30 + 10 + 6 = \dots\dots\dots$


3 Colorie le moins possible de pièces et de billets



46 €



38 €





1 Relie chaque égalité au nombre sur la bande numérique



$10 + 10 + 10 + 6$



$20 + 1 + 1 + 1 + 1$



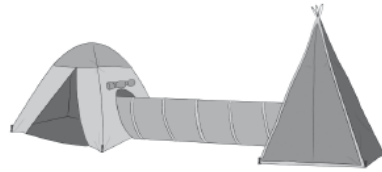
$10 + 20 + 9$



$10 + 10 + 1 + 1 + 1$

$10 + 10 + 10 + 1$

$30 + 7$



2 Ecris en chiffres

2 dizaines 4 unités =

$20 + 4 = \dots\dots\dots$

3 dizaines =

$30 + 7 = \dots\dots\dots$

2 dizaines 8 unités =

$40 + 1 = \dots\dots\dots$

4 dizaines 7 unités =

$10 + 10 + 9 = \dots\dots\dots$

3 dizaines 3 unités =

$20 + 10 + 7 = \dots\dots\dots$




4 dizaines 9 unités =

$30 + 10 + 6 = \dots\dots\dots$

3 Colorie le moins possible de pièces et de billets



46 €



38 €

