

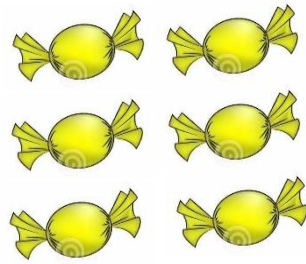
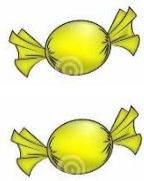
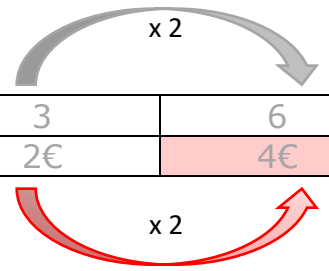


2€

?

Réponse : 4 €

Sucettes	3	6
Prix	2€	4€

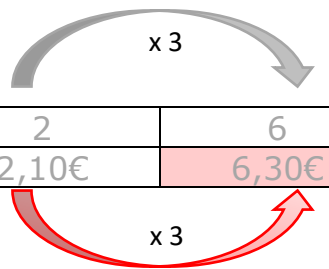


2,10 €

?

Réponse : 6,30 €

Bonbons	2	6
Prix	2,10€	6,30€

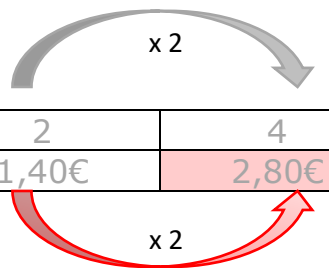


1,40€

?

Réponse : 2,80 €

Bonbons	2	4
Prix	1,40€	2,80€

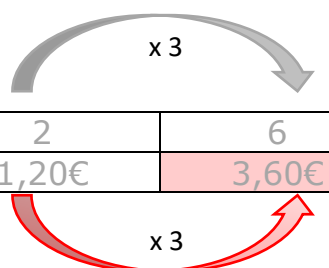


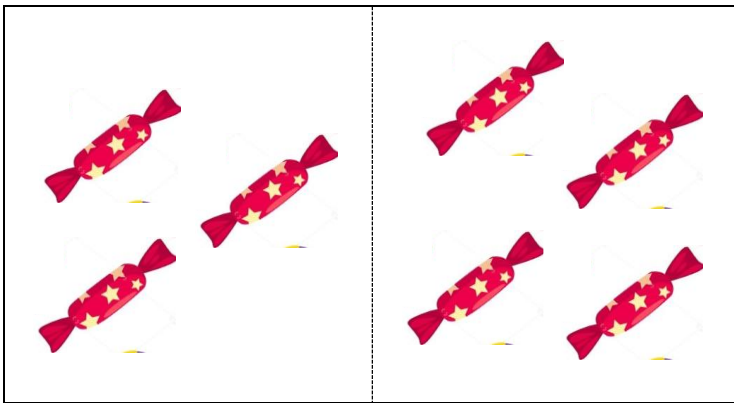
1,20€

?

Réponse : 3,60 €

Sucettes	2	6
Prix	1,20€	3,60€





6€

?

Réponse : 8 €

Sucettes	3	4
Prix	6€	8€

x 2



1€

?

Réponse : 1,50 €

Sucettes	2	3
Prix	1€	1,5€

x 0,50




3€

?

Réponse : 7,50€

Sucettes	2	5
Prix	3€	7,5€

x 1,5



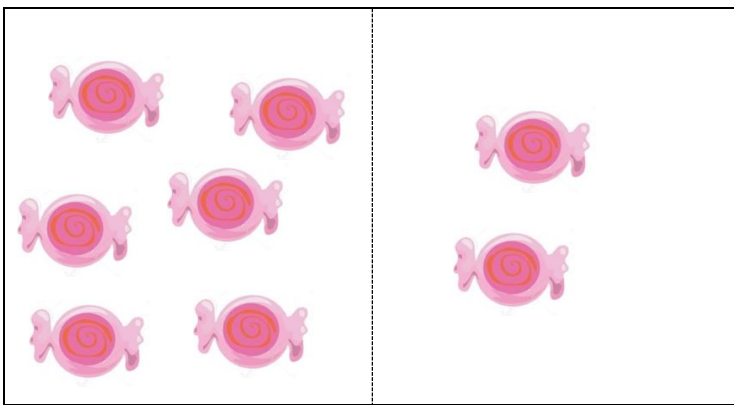
0,80€

?

Réponse : 2,80 €

Bonbons	2	7
Prix	0,80€	2,80€

x 0,4




3,30€

?

Réponse : 1,10 €

Bonbons	6	2
Prix	3,30€	1,10€

Diagram showing a grey arrow from 6 to 2 labeled ': 3' and a red arrow from 3,30€ to 1,10€ labeled ': 3'.



2,40 €

?

Réponse : 1,20 €

Bonbons	4	2
Prix	2,40€	1,20€

Diagram showing a grey arrow from 4 to 2 labeled ': 2' and a red arrow from 2,40€ to 1,20€ labeled ': 2'.

10 bonbons

1 bonbon

3€

?

Réponse : 0,30 €

Bonbons	10	1
Prix	3€	0,30€

Diagram showing a grey arrow from 10 to 1 labeled ': 10' and a red arrow from 3€ to 0,30€ labeled ': 10'.

3 gâteaux

12 gâteaux

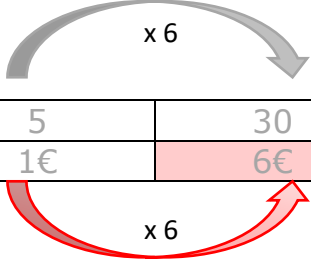
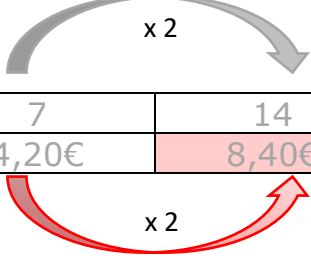
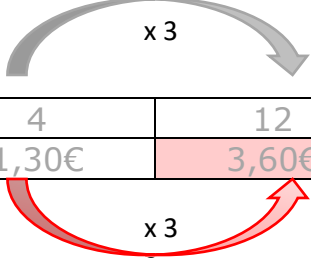
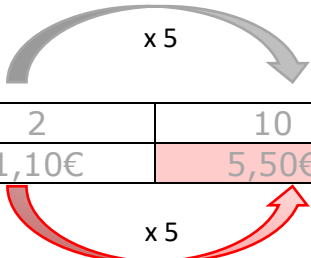
1,20€

?

Réponse : 4,80 €

Gâteaux	3	12
Prix	1,20€	4,80€

Diagram showing a grey arrow from 3 to 12 labeled 'x 4' and a red arrow from 1,20€ to 4,80€ labeled 'x 4'.

5 sucettes	30 sucettes	Réponse : 6 €  <table border="1" data-bbox="829 313 1540 392"> <tr> <td>Sucettes</td> <td>5</td> <td>30</td> </tr> <tr> <td>Prix</td> <td>1€</td> <td>6€</td> </tr> </table>	Sucettes	5	30	Prix	1€	6€
Sucettes	5	30						
Prix	1€	6€						
1€	?							
7 bonbons	14 bonbons	Réponse : 8,40 €  <table border="1" data-bbox="829 817 1540 896"> <tr> <td>Bonbons</td> <td>7</td> <td>14</td> </tr> <tr> <td>Prix</td> <td>4,20€</td> <td>8,40€</td> </tr> </table>	Bonbons	7	14	Prix	4,20€	8,40€
Bonbons	7	14						
Prix	4,20€	8,40€						
4,20€	?							
4 sucettes	12 sucettes	Réponse : 3,60 €  <table border="1" data-bbox="829 1332 1540 1411"> <tr> <td>Sucettes</td> <td>4</td> <td>12</td> </tr> <tr> <td>Prix</td> <td>1,30€</td> <td>3,60€</td> </tr> </table>	Sucettes	4	12	Prix	1,30€	3,60€
Sucettes	4	12						
Prix	1,30€	3,60€						
1,20€	?							
2 gâteaux	10 gâteaux	Réponse : 5,50 €  <table border="1" data-bbox="829 1836 1540 1915"> <tr> <td>Gâteaux</td> <td>2</td> <td>10</td> </tr> <tr> <td>Prix</td> <td>1,10€</td> <td>5,50€</td> </tr> </table>	Gâteaux	2	10	Prix	1,10€	5,50€
Gâteaux	2	10						
Prix	1,10€	5,50€						
1,10€	?							

6 bonbons	3 bonbons
-----------	-----------



1,20€	?
-------	---

15 gâteaux	5 gâteaux
------------	-----------

3,60€	?
-------	---

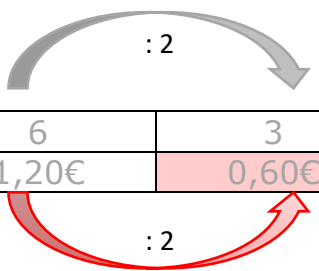
2 bonbons	7 bonbons
-----------	-----------

1€	?
----	---

	
---	---

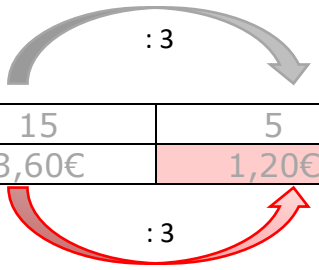
6€	?
----	---

Réponse : 0,60 €



Bonbons	6	3
Prix	1,20€	0,60€

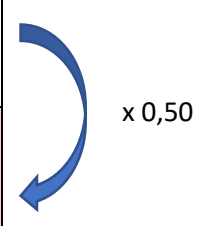
Réponse : 1,20 €



Gâteaux	15	5
Prix	3,60€	1,20€

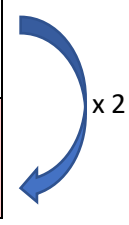
Réponse : 3,50 €

Bonbons	2	7
Prix	1€	3,50€



Réponse : 10 €

Gâteaux	3	5
Prix	6€	10€



2 bonbons	9 bonbons
-----------	-----------

0,60€	?
-------	---

Réponse : 2,70 €

Bonbons	2	9
Prix	0,60€	2,70€

$\times 0,30$

10 bonbons	4 bonbons
------------	-----------

1€	?
----	---

Réponse : 0,40 €

Bonbons	10	4
Prix	1€	0,40€

$: 10$



4 bonbons	6 bonbons
-----------	-----------

2€	?
----	---

Réponse : 3 €

Bonbons	4	6
Prix	2€	3€

$: 2$

	
---	---

1,20€	?
-------	---

Réponse : 3,50 €

Gâteaux	3	5
Prix	1,20€	2€

$\times 0,40$