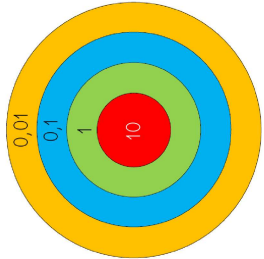


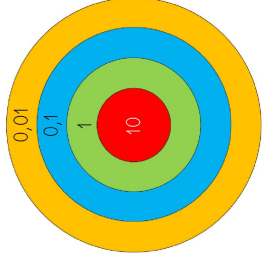
Le jeu de la cible

Fiche n°3

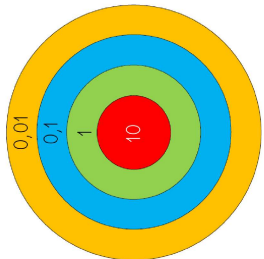
Avec 5 fléchettes seulement, forme le nombre indiqué sous la cible
(dessine 5 points sur chaque cible pour représenter les 5 fléchettes)



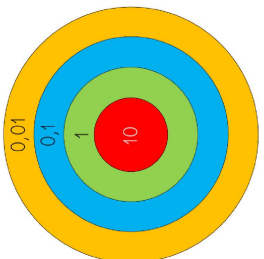
21,2



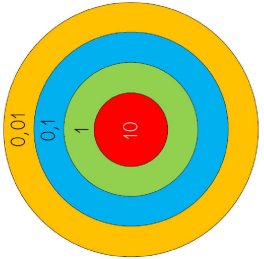
4,01



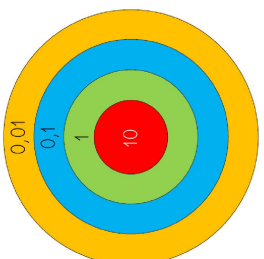
12,12



1,31



10,04

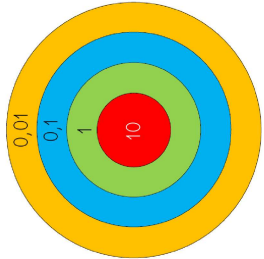


0,41

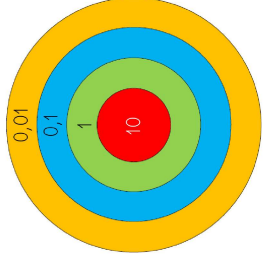
Le jeu de la cible

Fiche n°3

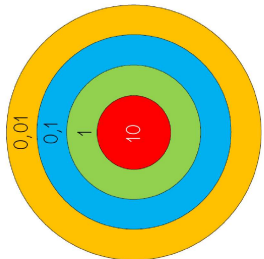
Avec 5 fléchettes seulement, forme le nombre indiqué sous la cible
(dessine 5 points sur chaque cible pour représenter les 5 fléchettes)



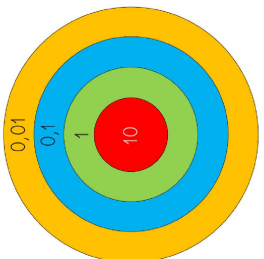
12,12



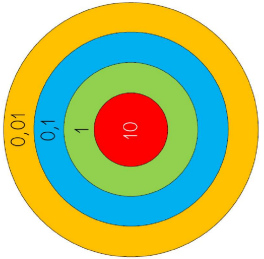
4,01



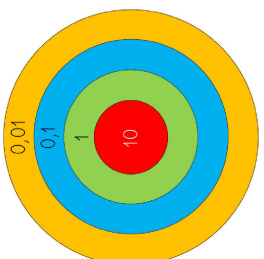
21,2



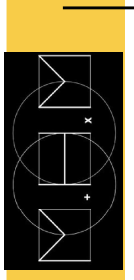
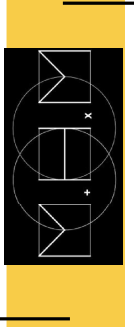
1,31



10,04



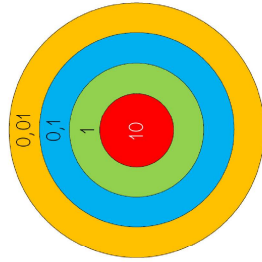
0,41



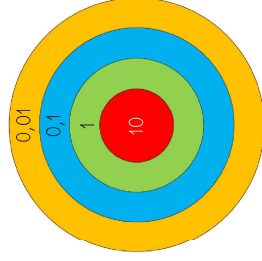
Le jeu de la cible

Fiche n°4

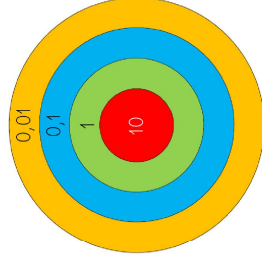
.....
 Avec le moins de fléchettes possible, forme le nombre indiqué sous la cible (dessine les points sur chaque cible pour représenter les fléchettes)



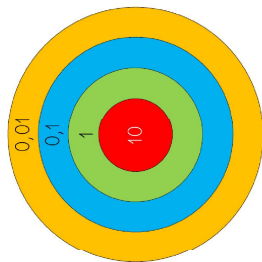
13,2



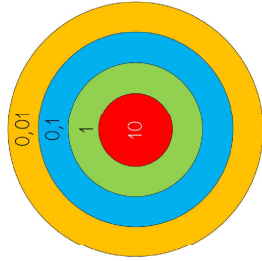
2,16



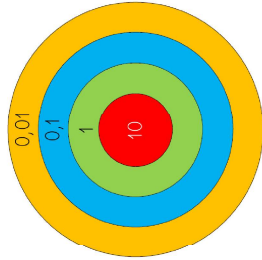
0,17



41,32



11,05

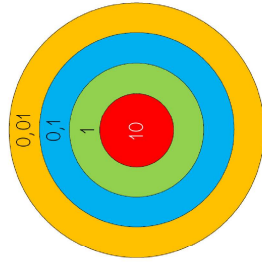


1,78

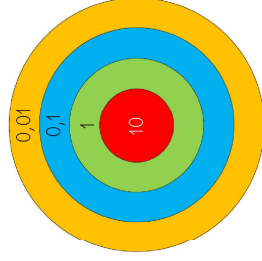
Le jeu de la cible

Fiche n°4

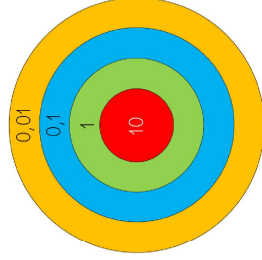
.....
 Avec le moins de fléchettes possible, forme le nombre indiqué sous la cible (dessine les points sur chaque cible pour représenter les fléchettes)



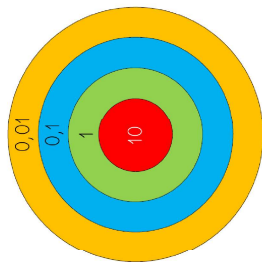
0,17



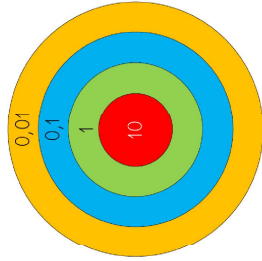
2,16



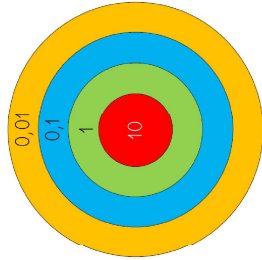
13,2



41,32



11,05



1,78